

QUARTERLY EXAMINATIONS

Mathematics

MARKS 50

Class : U.K.G.








Time : 2½ Hours

Syllabus

P.Nos. : 1 – 53


School Stamp

I. Count the number of articles. Write the correct number and number name in the boxes. One example has been done for you. (6 × 5 = 30)


Figures	Number	Number Name
	6	Six
		
		
		
		
		
		

II. Count and circle the correct number.


(3 × 2 = 6)

1. 

5 7 6 8 9

2. 

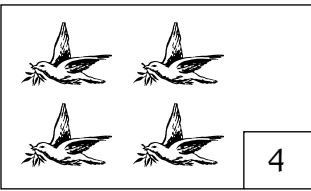
3 6 7 8 5

3. 

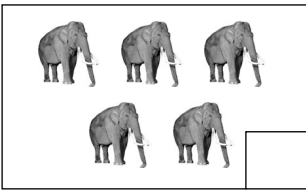
2 6 5 4

III. Count and write the correct number, one example has been done for you. ($4 \times 2 = 8$)

e. g. :




1.



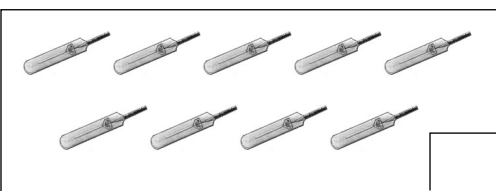
2.



3.



4.



IV. Match the shapes with lines.

(6)

