



Name :

Class :

Section :

Roll No.

Part - A

(10 × 3 = 30)

I. Answer the following questions.

- Find the sum of 10 km 260 m; 13 km 75 m and 24 km 780 m.
- Find the difference between 15 kg and 5 kg 450 grams.
- Three boys are of heights 136 cm, 108 cm and 144 cm. What is the total height of the three boys ?
- Convert 520 minutes into hours and minutes.
- Write any three points about a rectangle.
- Convert 3 hours into seconds.
- Do the following multiplication.

cm - mm

12 - 4

× 8

- Find the product of 15g 45 kg × 12
- A boy had to walk a distance of 800 m. After he walked a distance of 575 m he fell down. How far still had he to walk ?
- Write what you know about a cube or a cuboid.

(1 × 8 = 8)

II. Answer any ONE of the following.

- The quantities of milk sold by a milkmaid on the first three days of a week are respectively 45 l 500 ml, 53 l 250 ml and 64 lt 750 ml. Find the total quantity of milk the milk maid sold on all the three days.
- Multiply : 1) 6g 7 cg × 9
2) 4 kg 185 g × 13



(1 x 8 = 8)

III. Answer any ONE of the following.

- Convert the following into hours. a) 2 days 20 hours b) 4 days
- A medicine bottle contains 800 ml of medicine. After using up some medicine, 175 ml of medicine is still in the bottle. How much medicine is used up ?

IV. Answer any ONE of the following.

(1 x 8 = 8)

- There are 5 rolls of copper wire with 7m 50 cm of wire in each roll. Find the total length of wire in all the 5 rolls.

- Do the following sums.

1) cm - mm 2) l - ml 3) kg - g 4) m - cm

34 - 75 15 - 400 15 - 000 93 - 20

(+) 40 - 05 (+) 10 - 300 (-) 5 - 450 (-) 15 - 70

_____	_____	_____	_____
-------	-------	-------	-------






V. Answer any ONE of the following.

(1 x 6 = 6)

- Draw the following lines.

i) 2 vertical ii) 3 curved iii) 2 horizontal

- The following pictograph depicts the collection of toys a girl possesses. Each picture symbol represents 2 toys of each kind.

Elephants	
Teddy bears	
Aeroplanes	
Cars	
Horses	

Questions :

- What is the number of horse toys ?
- How many aeroplanes does the girl possess ?
- How many more cars than aeroplanes does the girl have ?



Name :

Class :


Section :

Roll No.

Part - B

(10 x 1 = 10)

I. Choose the correct answer and write its letter in the brackets.

1. One metre = _____ centimetres. ()
a) 100 b) 10 c) 1000
2. 29 m 70 cm – 80 m ()
a) 50 m 30 cm b) 60 m 20 cm c) 80 m
3. Number of days in January is ()
a) 30 b) 31 c) 29
4. _____ hours make one day. ()
a) 21 b) 26 c) 24
5. 10 minutes to 12 means ()
a) 12 : 10 b) 11: 50 c) 12 : 00
6.  Number of Rectangles ()
a) 2 b) 1 c) 3
7. $14\ l - 5\ l =$ _____ l ()
a) 9 b) 8 c) 10
8. _____ is the shortest of all the months. ()
a) May b) February c) December
9. The unit of measuring mass is ()
a) Kgs b) Metres c) Grams
10. 5 cm = _____ mm ()
a) 100 b) 500 c) 50

Note : Cut along with the marking to avoid uneven cutting or torn.



(10 x 1 = 10)

II. Fill in the blanks.

1. 1 litre = _____ ml.
2. 75 g - 45 g. = _____ g.
3. 4 l = _____ ml.
4. There are _____ days in an ordinary year.
5. No. of days in March = _____
6. 110 minutes = _____ hours.
7. A leap year = _____ days.
8. 300 cm = _____ m.
9. One Pine apple is Rs. 9, cost of one dozen Pine apples is _____.
10. A square has _____ corners.

(10 x 1 = 10)

III. Write 'True' or 'False'.

1. A circle has no corners. ()
2. A week has 14 days. ()
3. A leap year comes once in five years. ()
4. 1km = 100 m. ()
5. 2 litres 10 ml = 2010 ml. ()
6. There are 367 days in an ordinary year. ()
7. 5 cm = 50 mm. ()
8. A sphere has three curved faces. ()
9. The shortest month of the year is December. ()
10. Half past 4 means 4 : 30. ()



IV. Match the following.

A

B

- | | | |
|-------------------|---------|------------|
| 1. 134 cm – 47 cm | () | a) 975 cm |
| 2. 9 m 75 cm = | () | b) 3 sides |
| 3. Triangle has | () | c) 30 cm |
| 4. Kg = | () | d) 87 cm |
| 5. 17 cm + 13 cm | () | e) 1000 g |

A

B

- | | | |
|------------------------|---------|-------------|
| 1. 1 week | () | a) 6 faces |
| 2. Cuboid | () | b) last day |
| 3. Saturday | () | c) 7 days |
| 4. Quarter to 10 means | () | d) 2 faces |
| 5. Cone | () | e) 9 : 45 |

Note : Cut along with the marking to avoid uneven cutting or torn.



