


Name : ..... Section : ..... Roll No : .....



# QUARTERLY EXAMINATIONS

## Mathematics

MARKS 50

Class : L.K.G.

Time : 2½ Hours

School Stamp

I. Write 1 to 20 numbers.

(10)


II. Number to number matching.

(5)

4	15
8	11
11	18
15	8
18	4

III. Write the number names.

(5 × 1 = 5)

- 2 = \_\_\_\_\_
- 6 = \_\_\_\_\_
- 1 = \_\_\_\_\_
- 8 = \_\_\_\_\_
- 3 = \_\_\_\_\_

IV. Circle the smaller number.

(5 × 1 = 5)

- |   |   |
|---|---|
| 3 | 6 |
|---|---|
- |   |   |
|---|---|
| 7 | 2 |
|---|---|
- |   |   |
|---|---|
| 1 | 5 |
|---|---|
- |   |   |
|---|---|
| 9 | 4 |
|---|---|
- |   |   |
|---|---|
| 2 | 6 |
|---|---|

**V. Write the numbers.**

(5 × 1 = 5)

1. Six = \_\_\_\_\_
2. Two = \_\_\_\_\_
3. Five = \_\_\_\_\_
4. One = \_\_\_\_\_
5. Nine = \_\_\_\_\_

**VI. Write missing numbers.**

(5 × 1 = 5)

1. 14 \_\_\_ 16
2. 8 \_\_\_ 10
3. 2 \_\_\_ 4
4. 7 \_\_\_ 9
5. 13 \_\_\_ 15

**VII. Circle the bigger number.**

(5 × 1 = 5)

1. 

13	9
----	---
2. 

6	1
---	---
3. 

9	5
---	---
4. 

14	19
----	----
5. 

11	10
----	----

**VIII. Count and circle the correct number.**

(5 × 1 = 5)





- |   |   |   |
|---|---|---|
| 6 | 2 | 3 |
|---|---|---|



- |   |   |   |
|---|---|---|
| 5 | 1 | 8 |
|---|---|---|



- |   |   |   |
|---|---|---|
| 4 | 9 | 1 |
|---|---|---|



2      7      4

3      6      5

**IX. Identify these numbers.**

$(5 \times 1 = 5)$

1. 18 = \_\_\_\_\_

2. 12 = \_\_\_\_\_

3. 23 = \_\_\_\_\_

4. 15 = \_\_\_\_\_

5. 28 = \_\_\_\_\_



