


Name : ..... Section : ..... Roll No : .....



# HALF-YEARLY EXAMINATIONS

## Mathematics

MARKS 50

Class : L.K.G.

Time : 2½ Hours

*School Stamp*

I. Write 36 to 55 numbers.

(20 × ½ = 10)


II. Write the missing numbers.

(5 × 1 = 5)

1) 10 \_\_\_ 12

2) 8 \_\_\_ 10

3) 2 \_\_\_ 4

4) 32 \_\_\_ 34

5) 23 \_\_\_ 25

III. Number to number matching.

(5 × 1 = 5)

1) 21                      16

2) 34                      7

3) 16                      21

4) 7                        42

5) 42                      34

**IV. Write the numbers.**

(5 × 1 = 5)

- 1) Sixteen - \_\_\_\_\_
- 2) Eleven - \_\_\_\_\_
- 3) Nineteen - \_\_\_\_\_
- 4) Fourteen - \_\_\_\_\_
- 5) Twenty - \_\_\_\_\_

**V. Circle the smaller number.**

(6 × 1 = 6)

- 1) 17      13
- 2) 23      21
- 3) 19      20
- 4) 5        9
- 5) 33      35
- 6) 11      7

**VI. Identify these numbers and write in words.**

(5 × 1 = 5)

- 1) 25 = \_\_\_\_\_
- 2) 16 = \_\_\_\_\_
- 3) 32 = \_\_\_\_\_
- 4) 9 = \_\_\_\_\_
- 5) 42 = \_\_\_\_\_


**VII. Circle the bigger number.**

(6 × 1 = 6)


- 1) 21      19
- 2) 16      8
- 3) 33      39
- 4) 14      22
- 5) 9        4
- 6) 27      31

VIII. Count and circle the correct number.

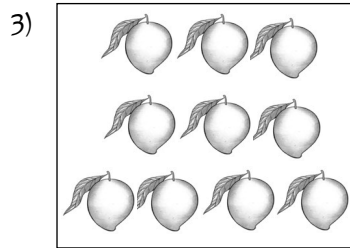
(8 × 1 = 8)




6 8 14




13 14 18




10 12 13




15 16 11



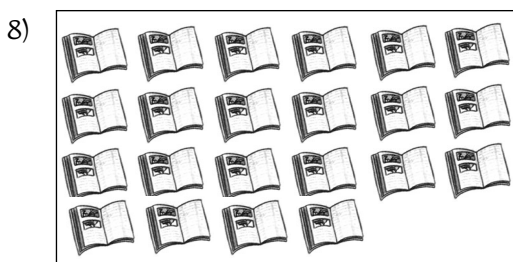
3 7 6



22 19 20



2 8 5



22 23 25



