


FORMATIVE ASSESSMENT - I
Class - 5 : Vikram Real Life
Environmental Studies



Syllabus:
(1 to 3 Lessons)
(Pg. No.s : 3 - 24)

Time : 1 Hour

Max. Marks : 25

Name :	Class :	Section :	Roll No.
--------	---------	-----------	----------

I. Answer the following questions. (3 × 2 = 6)

1. Describe the functioning of excretory system.

Ans.

2. What is the need for food ?

Ans.

3. What do you mean by needs ? Explain with example.

Ans.

II. Very short answer type questions. (3 × 1 = 3)

1. What do you mean by wants ?

Ans.

2. What is meant by balanced diet ?

Ans.

3. What are the organs of digestive system ?

Ans.

III. Fill in the blanks with the words given in the box. (5 × 1 = 5)

shelter, lungs, water, immunity, roughage

1. _____ is a fibrous material.

2. Our body's ability to fight against diseases is called _____.

3. _____ is a need but it becomes want soon.

4. _____ is called life saving fluid.

5. _____ are on either side of heart.

IV. Write True (or) False.

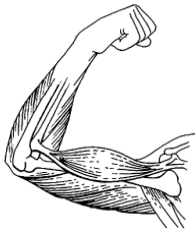
(6 × 1 = 6)

- 1. Roughage helps in digestion. _____
- 2. Carrot is a rich source of vitamin A. _____
- 3. Heart does not beat. _____
- 4. Water is a nutritious element. _____
- 5. Air is our need. _____
- 6. Lung supplies blood. _____

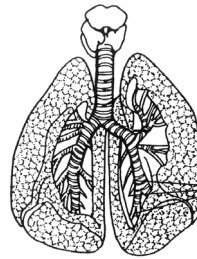
V. Identify the organs and state the related systems.

(5 × 1 = 5)

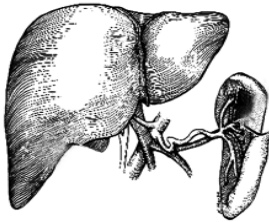
1.



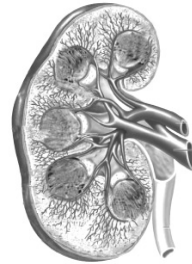
2.



3.



4.




5.





FORMATIVE ASSESSMENT - II

Class - 5 : Vikram Real Life
Environmental Studies



Syllabus:
(4 to 6 Lessons)
(Pg. No.s : 25 - 43)

Time : 1 Hour

Max. Marks : 25

Name :	Class :	Section :	Roll No.
--------	---------	-----------	----------

I. Answer the following questions.

(3 × 2 = 6)

1. What do you understand by the term omnivorous ?

Ans.

2. What is a globe ?

Ans.

3. Write the diseases caused due to lack of proteins in our diet.

Ans.

II. Very short answer type questions.

(4 × 1 = 4)

1. Define deficiency diseases ?

Ans.

2. What was the belief of people about the shape of the earth in ancient times ?

Ans.

3. What is scurvy ?

Ans.

4. What do you understand by ecosystem ?

Ans.

III. Fill in the blanks with the words given in the box.

(5 × 1 = 5)

globe, citrus fruit, plants, flat surface, Atlas

1. Map is drawn on _____ .

2. _____ is a collection of maps.

3. A _____ occupies alot of space.

4. _____ are the producers.

5. _____ are good source of Vitamin C.

IV. Write True (or) False.

(5 × 1 = 5)

1. Kwashiorkor due to lack of proteins _____
2. Food chain is a continuous process _____
3. Map is a model of the earth _____
4. Atlas has different types of globes _____
5. Lack of iron in diet causes Goitre _____

V. Match the following.

(5 M)

A


B

- | | | |
|--------------------|--------|----------------------------|
| 1. Anaemia | () | a) Soft and bent bones |
| 2. Globe | () | b) No vision in dim light |
| 3. Rickets | () | c) reduces haemoglobin |
| 4. Map | () | d) Miniature model |
| 5. Night blindness | () | e) Information about earth |



FORMATIVE ASSESSMENT - III

Class - 5 : Vikram Real Life
Environmental Studies



Syllabus:
(8 to 11 Lessons)
(Pg. No.s : 49 - 71)

Time : 1 Hour

Max. Marks : 25

Name :	Class :	Section :	Roll No.
--------	---------	-----------	----------

I. Answer the following questions.

(3 × 2 = 6)

1. Mention the role of dispensaries.

Ans.

2. Why should we not put fingers into nose ?

Ans.

3. Which type of clothes we wear in summers ?

Ans.

II. Very short answer type questions.

(4 × 1 = 4)

1. What type of clothes we wear in summer ?

Ans.

2. What are the types of burns ?

Ans.

3. When is the Republic Day celebrated ?

Ans.

4. What do you understand by the term 'natural disaster' ?

Ans.

III. Fill in the blanks with the words given in the box.

(5 × 1 = 5)

Gandhi, hands, wounds, clinics, carefulness

- _____ helps prevent accidents.
- There are many private _____ in a locality.
- Never rub your eyes with your _____
- In U.P. _____ cap is a popular head wear.
- _____ are not to be neglected.

IV. Write True (or) False.

(5 × 1 = 5)

1. Artificial respiration is to be given to victim of poison _____
2. We should save environment _____
3. Night schools are for children _____
4. Cancer is an epidemic diseases _____
5. Mouth should not be washed regularly _____

V. Look at the pictures and write names of health care centres.

(3 × 1 = 3)



VI. What do we observe on the following days.


(2 × 1 = 2)

1. 15th August _____
2. 26th January _____



FORMATIVE ASSESSMENT - IV

Class - 5 : Vikram Real Life
Environmental Studies



Syllabus:
(14 to 16 Lessons)
(Pg. No.s : 89 - 108)

Time : 1 Hour

Max. Marks : 25

Name :	Class :	Section :	Roll No.
--------	---------	-----------	----------

I. Answer the following questions.

(3 × 2 = 6)

1. What is Gir National Park famous for ?

Ans.

2. Who were revolutionaries ?

Ans.

3. Who built Red Fort and what is it made of ?

Ans.

II. Very short answer type questions.

(4 × 1 = 4)

1. By whom was Hawa Mahal built ?

Ans.

2. What are the parallel ranges of the Himalayas ?

Ans.

3. When was INC found and by whom ?

Ans.

4. What is the area of our country ?

Ans.

III. Name the State where we can find them.

(5 × 1 = 5)

Karnataka, Meghalaya, Rajasthan, Punjab, Karnataka

1. Kolar Gold mines _____

2. Sutlej basin _____

3. Jog Falls _____

4. Mawsynram _____

5. Indira Gandhi Canal _____

IV. Write True (or) False.

(2 × 1 = 2)


1. Northern plains are storehouse of woods. _____
2. Nandadevi is the highest peak of the world. _____

V. Name these national symbols.

(3 × 1 = 3)







VI. Match the following.

(5 M)

A

1. Manas wildlife sanctuary ()
2. Corbett National Park ()
3. Dachigam wildlife sanctuary ()
4. Sunderbans National Park ()
5. Gir National Park ()

B

- a) Jammu and Kashmir
- b) Tigers
- c) Gujarat
- d) World heritage site
- e) Uttarakhand




SUMMATIVE ASSESSMENT - I

Class - 5 : Vikram Real Life Environmental Studies

Syllabus:
(1 to 7 Lessons)
(Pg. No.s : 3 - 48)

Time : 2½ Hours

Max. Marks : 50



Name :	Class :	Section :	Roll No.
--------	---------	-----------	----------

I. Answer the following questions.

(10 × 2 = 20)

1. Name different kinds of joints.
2. What do you mean by needs ? Explain with example.
3. What are the different kinds of food rich in ?
4. What is a 'Food Web' ?
5. How does deficiency cause diseases ?
6. What is a globe ?
7. Mention colour scheme used on a map.
8. What is the need for food ?
9. What do you understand by the term 'omnivorous' ?
10. What is Scurvy ?

II. Choose the correct answer and write its letter in the bracket.

(5 × 1 = 5)

1. Vitamin C deficiency leads to _____ ()
a) Beri-Beri b) Pellagra c) Scurvy
2. _____ is caused in very small children due to lack of protein. ()
a) Marasmus b) Kwashiorkor c) Goitre
3. A collection of a number of maps in the form of a book is called ()
a) Map b) Atlas c) Globe
4. _____ controls working of human body. ()
a) Lungs b) Kidneys c) Brain
5. Food rich in vitamins and minerals are called _____ food ()
a) Body-building b) Protective c) energy-giving

III. Fill in the blanks.

(5 × 1 = 5)

1. Skull provides protection to _____
2. _____ is called life saving fluid.
3. _____ is a fibrous material.
4. Process of preparation of food by _____ is called _____
5. _____ are good source of vitamin C.

IV. Identify the organs and state the related systems.

(5 × 1 = 5)

1. Skull : _____
2. Kidneys : _____
3. Muscles : _____
4. Nerves : _____
5. Liver : _____

V. Write "True" or "False".

(5 × 1 = 5)

1. Hearth does not beat. ()
2. Shelter becomes want soon. ()
3. Carrot is a rich source of vitamin A. ()
4. Plants do not require food. ()
5. Scurvy leads to a disease Rickets. ()

VI. Match the following.

(7 × 1 = 7)


- | A | | B |
|--------------------|-----|-----------------------------|
| 1. Kwashiorkor | () | a) soft and bent |
| 2. Scurvy | () | b) related to thyroid gland |
| 3. Rickets | () | c) pain in body |
| 4. Goitre | () | d) reduces haemoglobin |
| 5. Night blindness | () | e) bleeding gums |
| 6. Beri-Beri | () | f) lack of proteins |
| 7. Anaemia | () | g) no vision in dim light |

VII. Write the missing letters.

(3 × 1 = 3)

- 1) V _ T _ MI _ S 2) D _ F _ CI _ N _ Y 3) R _ C _ ET _





Name :	Class :	Section :	Roll No.
--------	---------	-----------	----------

I. Answer the following questions.

(10 × 2 = 20)

1. How is air one of the needs ?
2. What is a food chain ?
3. What are the limitations of a map ?
4. Name the four directions and four sub-directions ?
5. What type of clothes do Bengalis wear ?
6. How can we take care of the skin ?
7. Mention the functioning of health club.
8. How do we celebrate Teacher's Day ?
9. How does an earthquake generate ?
10. Describe the functioning of excretory system.

II. Choose the correct answer and write its letter in the bracket.

(5 × 1 = 5)

1. In summer we wear _____ clothes as they keep us cool. ()
a) cotton b) wool c) silk
2. Food rich in carbohydrates and fats are called _____ food. ()
a) protective b) energy-giving c) body-building
3. _____ are primary consumers. ()
a) Herbivores b) Carnivores c) Omnivores
4. _____ deficiency leads to reduced clotting of blood. ()
a) Vitamin C b) Vitamin D c) Vitamin K
5. Muscular system consists of _____ muscles. ()
a) 750 b) 650 c) 550

III. Fill in the blanks.

(5 × 1 = 5)

1. Contraction and expansion of muscles allow movement of _____
2. Our body's ability to fight against diseases is called _____

3. Omnivores eat both _____ and _____
4. _____ is a collection of maps.
5. _____ is a dress of people in hilly areas.

IV. Write the names of five Health Care Centres.

(5 × 1 = 5)

1. _____
2. _____
3. _____
4. _____
5. _____

V. Write "True" or "False".

(5 × 1 = 5)

1. Doctors treatment is called first-aid. ()
2. Mouth should not be washed regularly. ()
3. Atlas has different types of globes. ()
4. Map is a model of the earth. ()
5. Water is a nutritious element. ()

VI. Match the following.

(5 × 1 = 5)

A

B

- | | | |
|---------------------------|-----|------------------------|
| 1. Mobile dispensary vans | () | a) Health care centres |
| 2. Private clinics | () | b) Sound mind |
| 3. Health clubs organise | () | c) Paid services |
| 4. Hospitals are | () | d) Health camps |
| 5. Healthy body has | () | e) Remote areas |

VII. Write the missing letters.

(5 × 1 = 5)

- | | |
|--------------------|-------------------------|
| 1) M _ N _ R _ LS | 2) RO _ G _ A _ E |
| 3) C _ O _ H _ S | 4) CA _ B _ H _ DR _ TE |
| 5) CO _ S _ M _ RS | |



3. A simple type of map scale is called _____
4. Health clubs organise many health _____
5. Himalayas are store house of _____

IV. Name.

(5 × 1 = 5)

1. Who built the Hawa Mahal ? _____
2. Who built the Qutub Minar ? _____
3. Who built the Taj Mahal ? _____
4. Who built the Red Fort ? _____
5. Who built the Stupa of Sanchi _____

V. Write "True" or "False".

(5 × 1 = 5)

1. Northern plains are storehouse of woods. ()
2. Lava is a kind of dark liquid. ()
3. Artificial respiration is to be given to victim of poison. ()
4. Dirty tongue generates of foul smell in the mouth. ()
5. Sketch is a map without scales. ()

VI. Match the following.

(5 × 1 = 5)

- | A | | B |
|----------|-----------|---------------------------|
| 1. Ear | () | a) always rinse |
| 2. Nails | () | b) round in shape |
| 3. Atlas | () | c) never put sharp object |
| 4. Earth | () | d) avoid biting |
| 5. Mouth | () | e) collection of maps |

VII. Write the missing letters.

(5 × 1 = 5)

1. PE _ I _ S _ LA
2. MO _ U _ EN _ S
3. W _ L _ L _ FE
4. DI _ P _ NS _ RY
5. CA _ N _ V _ R _ S

