


Name : Section : Roll No :



SUMMATIVE ASSESSMENT – I

English

MARKS **50**

Class : L.K.G.

Time : 2½ Hours

School Stamp

Syllabus : Pg. No.s : (4 – 17)

I. Write the capital letters from A to J. (10)

II. Match capital letter to small letter. (10)

- | | |
|-----|-----|
| M • | • t |
| O • | • m |
| Q • | • w |
| T • | • o |
| W • | • q |

III. Write the missing letters. (10)

- | | |
|------------|------------|
| 1. K _ ng | 6. Sh _ P |
| 2. La _ P | 7. V _ n |
| 3. N _ b | 8. Wo _ f |
| 4. Qu _ ll | 9. y _ k |
| 5. R _ t | 10. Z _ ro |

IV. Write the following words in the given spaces. (5 × 2 = 10)

- Mumbai _____
- English _____
- Rahul _____
- Delhi _____
- India _____

V. Match picture to word.

(10)

A



Bat



Flower



Ball



Hen



Pot

B



Rabbit



Bag



Apple




Kite



Pen



Name : Section : Roll No :



SUMMATIVE ASSESSMENT – I

Mathematics

MARKS 50

Class : L.K.G.

Time : 2½ Hours

School Stamp

Syllabus : Pg. No.s : (54 – 72)

I. Write 1 to 10 numbers.

(10)

--	--	--	--	--	--	--	--	--	--

II. Number to number matching.

(5)

- | | | |
|------|---|----|
| 12 • | • | 7 |
| 14 • | • | 16 |
| 16 • | • | 5 |
| 7 • | • | 14 |
| 5 • | • | 12 |

III. Write the number names.

(5 × 2 = 10)

- 11 = _____
- 18 = _____
- 15 = _____
- 4 = _____
- 9 = _____

IV. Circle the smaller number.

(5 × 1 = 5)

1.

10	8
----	---
2.

13	10
----	----
3.

3	7
---	---
4.

11	17
----	----
5.

8	2
---	---

V. Write the numbers.

(5 × 1 = 5)

1. Three = _____
2. Ten = _____
3. Eighth = _____
4. Seven = _____
5. Four = _____

VI. Write missing numbers.

(5 × 1 = 5)

1. 17 ___ 19
2. 13 ___ 15
3. 6 ___ 8
4. 3 ___ 5
5. 10 ___ 12

VII. Circle the bigger number.

(5 × 1 = 5)

1.

12	9
----	---
2.

8	4
---	---
3.

13	10
----	----
4.

2	5
---	---
5.


11	16
----	----

VIII. Count and circle the correct number.

(5 × 1 = 5)





6	2	3
---	---	---



5	1	8
---	---	---



4	9	1
---	---	---



2 7 4

3 6 5


IX. Count and write the number names.

(5 × 1 = 5)

1.		<input type="text"/>	<input type="text"/>	<input type="text"/>	<input type="text"/>	<input type="text"/>
2.		<input type="text"/>	<input type="text"/>	<input type="text"/>	<input type="text"/>	<input type="text"/>
3.		<input type="text"/>	<input type="text"/>	<input type="text"/>	<input type="text"/>	<input type="text"/>
4.		<input type="text"/>	<input type="text"/>	<input type="text"/>	<input type="text"/>	<input type="text"/>
5.		<input type="text"/>	<input type="text"/>	<input type="text"/>	<input type="text"/>	<input type="text"/>



Name : Section : Roll No :



SUMMATIVE ASSESSMENT – I

Colouring

MARKS 50

Class : L.K.G.

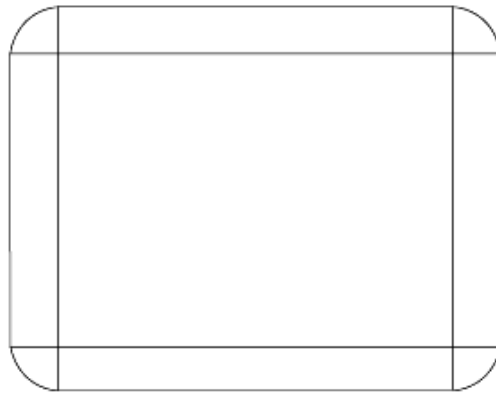
Time : 2½ Hours

School Stamp

Syllabus : Pg. No.s : (116 – 120)


I. Colour the following picture.

(15)



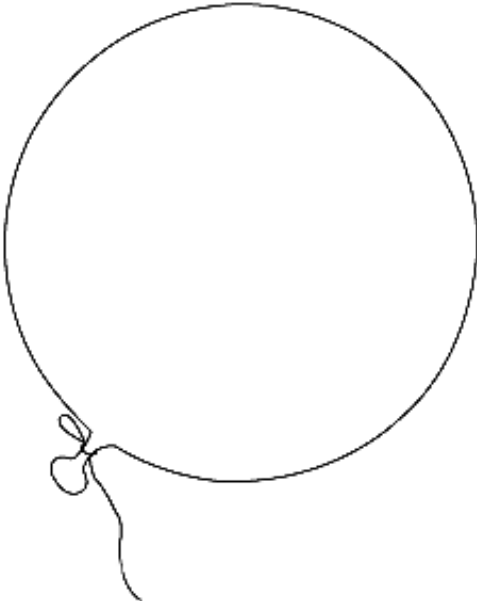
II. Colour the following picture.

(10)



III. Colour the following picture.

(10)




IV. Colour the following picture.

(15)



Name : Section : Roll No :



SUMMATIVE ASSESSMENT – I

Rhymes

MARKS **50**

Class : L.K.G.

Time : 2½ Hours

School Stamp

Syllabus : Pg. No.s : (36 – 38)

I. To recite the poems.

1. Ten Little Fingers (13)

2. Johny, Johny (10)


3. Ring – A – Ring O' Roses (7)

4. Jack and Jill (12)

5. Good Night (8)



Name : Section : Roll No :



SUMMATIVE ASSESSMENT – I

General Knowledge

MARKS 50

Class : L.K.G.






Time : 2½ Hours

School Stamp

Syllabus : Pg. No.s : (104 – 106)






I. Match the following vegetables with their names.

(5 × 2 = 10)

- | | | |
|----|---|--------------|
| 1. |  | Bitter gourd |
| 2. |  | Chilli |
| 3. |  | Carrot |
| 4. |  | Potato |
| 5. |  | Beetroot |






II. Match the following fruits with their names

(5 × 2 = 10)

- | | | |
|----|---|------------|
| 1. |  | Banana |
| 2. |  | Mango |
| 3. |  | Grapes |
| 4. |  | Jackfruit |
| 5. |  | Watermelon |











III. Match the following flowers with their names.

(5 × 2 = 10)

- | | | |
|----|---|----------|
| 1. |  | Rose |
| 2. |  | Daffodil |
| 3. |  | Lotus |
| 4. |  | Hibiscus |
| 5. |  | Daisy |

IV. Circle the vegetables from the following pictures.

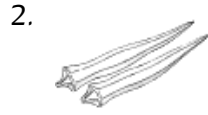
(10)

- | | | | | | | | |
|----|---|-----|---|----|---|----|---|
| 1. |  | 2. |  | 3. |  | 4. |  |
| 5. |  | 6. |  | 7. |  | 8. |  |
| 9. |  | 10. |  | | | | |

V. Write the correct name below the given pictures. Using 'Help Box'.

(5 × 2 = 10)











Help Box : Cabbage Lady's finger Daisy Watermelon Papaya



