


Name : Section : Roll No :



HALF-YEARLY EXAMINATIONS

Mathematics

MARKS 50

Class : I

Time : 2½ Hours

Syllabus

Chapters : 1 to 8

School Stamp

I. Write the number names for the following numerals. (4 × 1 = 4)

1. 63 = _____ 3. 56 = _____
2. 74 = _____ 4. 92 = _____

II. Write the numerals for the following number names. (4 × 1 = 4)

1. Sixty Seven = 3. Seventy Nine =
2. Thirty Three = 4. Fourty Six =

III. Write the expanded form of each of the following. (2 × 1 = 2)

e.g. : 57 = 5 Tens + 7 Ones = 5(10) + 7(1) = 50 + 7

1. 96 = _____ Tens + _____ Ones = _____ = _____
2. 43 = _____ Tens + _____ Ones = _____ = _____

IV. Write the short form of each of the following. (2 × 1 = 2)

e.g. : 7 Tens + 6 Ones = 7(10) + 6(1) = 70 + 6 = 76

1. 5 Tens + 8 Ones = _____ = _____ = _____
2. 8 Tens + 9 Ones = _____ = _____ = _____

V. Write the following numbers in ascending order. (2)

63, 96, 21, 6, 45

_____, _____, _____, _____, _____

VI. Write the following numbers in descending order. (2)

45, 61, 89, 50, 12

_____, _____, _____, _____, _____

VII. Fill in the blanks with "<, > or =". (4 × ½ = 2)

1. 25 25 2. 32 30 3. 65 89 4. 45 63

VIII. Tick (✓) the greatest number of the following sets. (2 × 1 = 2)

1. 96 53 61 99


2. 35 40 22 63

IX. Tick (✓) the least number of the following sets. (2 × 1 = 2)

1. 12 3 65 22

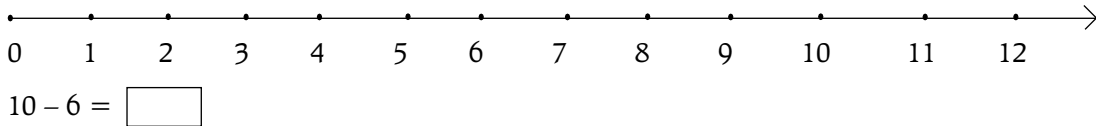
2. 36 42 79 53

X. Do the following additions. (2)



+ =

XI. Do the following subtraction using the number ray. (2)



10 - 6 =

XII. Do the following additions using expanded form. (2)

72 = Tens + Ones

14 = Tens + Ones

= Tens + Ones

= +

72 + 14 =

XIII. Do the following additions. (4 × 1 = 4)

1.

Tens	Ones
6	3
(+)	3
5	

2.

Tens	Ones
3	3
(+)	6
2	

3.

Tens	Ones
5	6
(+)	4
1	

4.

Tens	Ones
3	4
(+)	1
5	

XIV. Do the following subtractions. (4 × 1 = 4)

1.

23
(-) 18

2.

64
(-) 55

3.

75
(-) 57

4.

83
(-) 28

XV. Write the addition form of each of the following.

(2 × 1 = 2)

e.g. : $5 \times 4 = 5 + 5 + 5 + 5$

1. $6 \times 3 =$

2. $2 \times 9 =$

XVI. Do the following multiplications.

(4 × 1 = 4)

1.
$$\begin{array}{r} 25 \\ \times 2 \\ \hline \hline \end{array}$$

2.
$$\begin{array}{r} 48 \\ \times 2 \\ \hline \hline \end{array}$$

3.
$$\begin{array}{r} 42 \\ \times 2 \\ \hline \hline \end{array}$$

4.
$$\begin{array}{r} 15 \\ \times 2 \\ \hline \hline \end{array}$$

XVII. Write subtraction facts of each of the following.

(2)

Addition facts	Subtraction facts	
e.g. : $16 + 4 = 20$	$20 - 4 = 16$	$20 - 16 = 4$
1. $6 + 4 = 10$		
2. $9 + 5 = 14$		

XVIII. Answer the following.

(3 × 2 = 6)

1. 27 men passengers and 14 women passengers are in a bus. What is the total number of passengers ?

Ans.

2. Find the cost of 9 bananas at the rate of rupees 2 per banana.

Ans.

3. There are 85 apples and 48 mangoes in a basket. How many more are the apples ?

Ans.



