

Name : Section : Roll No :



QUARTERLY EXAMINATIONS

Mathematics

MARKS **50**

Class : I

Time : 2½ Hours


Syllabus

Units : 1-4


School Stamp

I. Circle the correct numeral.

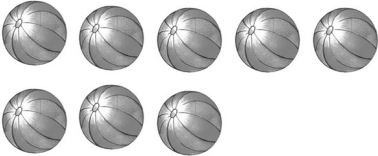
(5 × 2 = 10)

1.  4
8
7

2.  5
3
7

3.  5
3
2

4.  2
0
1

5.  19
8
6

II. Write the proper symbol "> or < or =" in the space.

(5 × 1 = 5)

1. 40 ___ 44
2. 15 ___ 12
3. 19 ___ 19
4. 8 ___ 0
5. 24 ___ 28

III. Write the following numbers in descending order.

(5)

72, 36, 45, 51, 29

Ans. _____, _____, _____, _____, _____,

IV. Fill in the blanks.

(5 × 1 = 5)

1. The expanded form of 69 = _____
2. 14 is _____ than 3.
3. The symbol for subtraction is _____
4. 17 comes _____ 18.
5. $7 + 4 + 2 =$ _____

V. Write the number names for the following numbers.

(4 × 2 = 8)

1. 75 = _____
2. 43 = _____
3. 98 = _____
4. 33 = _____

VI. Write the number which comes BETWEEN the two numbers in each pair. (6 × 1 = 6)

1. 6 _____ 8
2. 12 _____ 14
3. 3 _____ 5

4. 15 _____ 17

5. 1 _____ 3

6. 7 _____ 9

VII. Write the missing numbers.

(2 × 4 = 8)

1. _____ 22 _____ 25 _____ 29

2. _____ 54 _____ 58

VIII. Write the table 4.

(3)

$4 \times 1 = 4$

$4 \times 10 = 40$



