


Name : Section : Roll No :



HALF-YEARLY EXAMINATIONS

Numbers

MARKS 50

Class : L.K.G.

Time : 2½ Hours

School Stamp

I. Write the missing numbers 72 to 86. (12)












72				
		79		
				86

II. Count the following figures and write the correct number in the circle. (4 × 3 = 12)



III. Match the following.

(10 × 1 = 10)

	1	2	
	3	4	
	5	6	
	7	8	
	9	10	
			

IV. Write the following letters in the Ascending order and the Descending order. (4 × 2 = 8)

1. 6, 3, 2, 9, 1

Ascending order

Descending order

2. 5, 8, 4, 3, 2

V. Match the following.

(4 × 2 = 8)

- | | | |
|----------|---------|-------|
| (A) | | (B) |
| 1. 5 + 1 | () | a) 5 |
| 2. 2 + 3 | () | b) 11 |
| 3. 5 + 4 | () | c) 6 |
| 4. 7 + 4 | () | d) 9 |

