


Name : Section : Roll No :



ANNUAL EXAMINATIONS

NUMBERS

MARKS 50

L.K.G

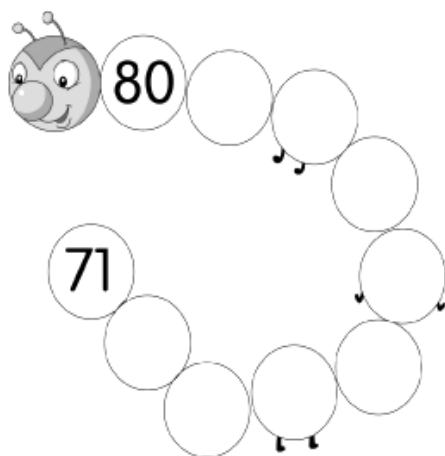
Time : 2½ Hours

Syllabus

1 - 100

School Stamp

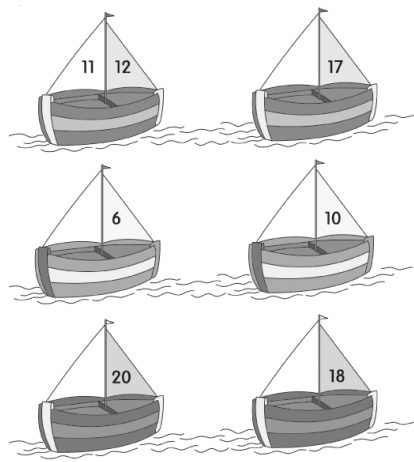
I. Complete Mr. Caterpilla's body by filling in the between numbers. (8M)



II. Look at the box with numbers on them. Can you write the correct missing numbers in order ? (15M)

1									10
				15				19	
21							28		
		33			36				
	42								50
		53		55					
61							67		
					76			79	
	82						88		
				95					100


III. Look at the number on the sail of each boat. Can you fill in the number that comes before it ? (6M)



IV. Look at these objects on the right. Count and match them to the correct numbers. (5M)

7.	•	
12.	•	
5.	•	
15.	•	
2.	•	

V. Each colourful kite flying has a number written on it. Can you match the kite to the string with the number before it ? (4M)



VI. Circle the smaller numbers.

(2M)


1.

67	77
----	----

2.

88	98
----	----

VII. Here are some fish swimming in the water. Number them from 1 – 8 and then colour them. (10M)



☆☆☆

