


Name : Section : Roll No :



UNIT TEST - I

NUMBERS

Class : L.K.G

Syllabus

1 - 25

MARKS **25**

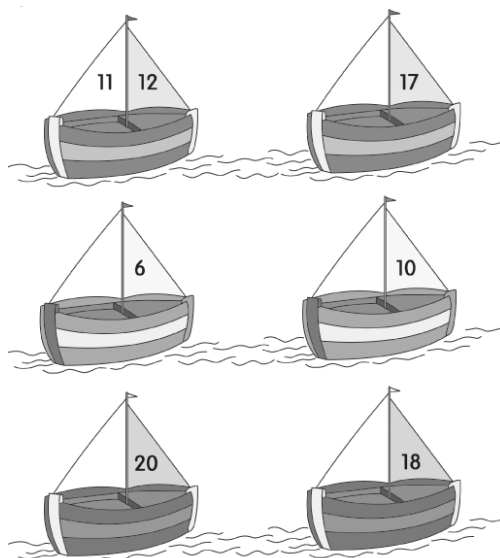
Time : 1 Hour

School Stamp

I. Look at these objects on the right. Count and match them to the correct numbers. (5M)

7.	•	
12.	•	
5.	•	
15.	•	
2.	•	

II. Look at the number on the sail of each boat. Can you fill in the number that comes before it? (6M)



III. Here is a table of numbers from 1 to 25. Can you complete the box by writing the correct missing numbers ? (5M)

1					6			
10					15			
						25		

IV. Look at the number in each box. Can you fill in the number.

(4M)

1.

19	
----	--

 2.

12	
----	--

 3.

20	
----	--
4.

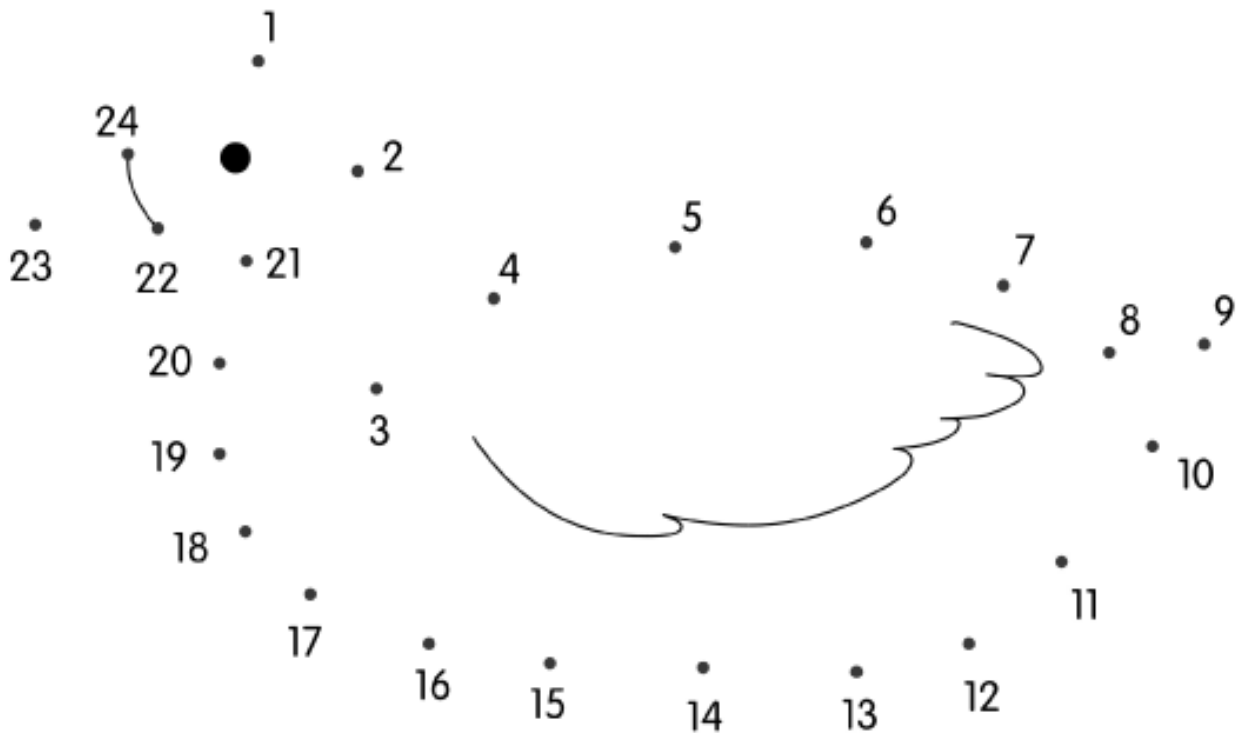
2	
---	--

 5.

11	
----	--

V. Join the dots from 1 to 24 and find out which graceful animal this is.

(5M)



☆☆☆