


Name : Section : Roll No :



UNIT TEST - III

NUMBERS

Class : L.K.G

Syllabus

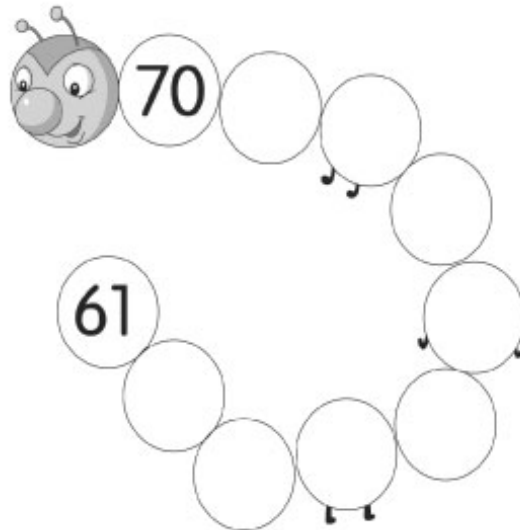
51 to 75

MARKS **25**

Time : 1 Hour


School Stamp

I. Complete Mr. Caterpillar's body by filling in the between numbers. (8M)



II. Each colourful kite flying has a number written on it.

Can you match the kite to the string with the number before it ? (4M)



III. Here is a table of numbers from 56 to 75. Can you complete the box by writing the correct missing numbers ? (10M)

56				60				
		67						
	75							

IV. Circle the bigger numbers. (3M)

1.

2.

3.

4.

5.

☆☆☆