


Name : Section : Roll No :



UNIT TEST - II

GENERAL KNOWLEDGE

Class : U.K.G.

MARKS **25**

Time : 1 Hour

Syllabus

Places of worship (To) festivals

School Stamp

1. Answer the following questions.

(7 × 2 = 14)

1. Where does Muslims to pray ?

Ans.

2. Where does Christians pray ?

Ans.

3. Where does Hindus pray ?

Ans.

4. Which travels on water ?

Ans.

5. How many wheels has bicycle ?

Ans.


6. Which festival we celebrate with lighting of lamps and crackers ?


Ans.


7. When we celebrate Independence Day ?


Ans.


II. Cross (X) the pictures where the vehicles are travelling on the wrong surface. (6 × 1 = 6)














III. Write the mis-spelt words.

(5 × 1 = 5)

1. Crishamst _____

2. usb _____

3. aryp _____

4. cuhrhc _____

5. rtian _____

★★★★★