

# UNIT TEST - II

## ENVIRONMENTAL STUDIES

MARKS 25

Class : U.K.G.

Time : 1 Hour

### Syllabus

Staying clean and healthy (To) Healthy Food Habits

*School Stamp*

I. Look at these pictures below. Can you find out what these people are doing ? Tick the right answer. (4)



Jumping

Dancing



Jogging

Standing



Cycling

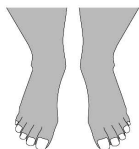
Jumping



Standing

Skipping

II. These are some objects that we use to keep ourselves clean. Can you match the correctly ? (3M)



•



•



•



•



•



•

**III. Write the Healthy Food Habits.**

**(5M)**





**IV. Fill in the blanks.**

**(5 x 1 = 5)**

1. Always eat \_\_\_\_\_ food that is kept covered.
2. \_\_\_\_\_ your hands before and after your meals.
3. \_\_\_\_\_ your teeth.
4. Sleep well at \_\_\_\_\_ .
5. Eat \_\_\_\_\_ meals.

**V. Identify the picture and name them.**

**(4 x 1 = 4)**

1.  \_\_\_\_\_
2.  \_\_\_\_\_
3.  \_\_\_\_\_
4.  \_\_\_\_\_

**VI. Write the missing letters.**

**(4 x 1 = 4)**

1. D \_\_\_ l                      2. R \_\_\_ ce                      3. B \_\_\_ t \_\_\_                      4. H \_\_\_ ir

\*\*\*\*\*