

UNIT TEST - III

MATHEMATICS

MARKS 25

Class : U.K.G

Time : 1 Hour

Syllabus

Greater than, Less than and Equal to



School Stamp

I. Count the number of objects and put the correct symbols (<, >, =) in the given boxes. (5 × 2 = 10)

1.



2.



3.



4.



5.



II. Count the number of objects on both sides in each set and write the corresponding numbers in the boxes. $(5 \times 2 = 10)$




III. Count the number of objects in each set and Tick (\checkmark) the set having greater number of objects. $(3 \times 1 = 3)$



3.  

IV. Count the number of objects in each set and Tick (✓) the set having less number of objects. (2 × 1 = 2)

1.  

2.  

★★★★★