

Name :






Class :

Section :

Roll No.

I. Count the objects given in each row and write the corresponding numeral of each.

(5 x 1 = 5)

S.No.	Objects	Numerals
1)		<input type="text"/>
2)		<input type="text"/>
3)		<input type="text"/>
4)		<input type="text"/>
5)		<input type="text"/>

II. Write the missing numerals in the boxes.

(5 x 1 = 5)

10 11 12 15 16 17

60 61 62 63 65

52 53 54 55 57 58 59

III. Write the number names of the following.

(5 x 1 = 5)

1) 63 = 4) 67 =

2) 37 = 5) 58 =

3) 89 =

IV. Write the expanded form of the following.

(5 x 2 = 10)

1) 39 = Tens + Ones = +

2) 38 = Tens + Ones = +

3) 54 = Tens + Ones = +

4) 75 = Tens + Ones = +

5) 76 = Tens + Ones = +

V. Write numerals from '71 to 80'.

(10 x 1 = 10)

VI. Write the number which comes after.

(5 x 1 = 5)

1) 19

3) 56

5) 94

2) 75

4) 45

VII. Write the number which comes in between.

(5 x 1 = 5)

1) 39 41

3) 51 53

5) 95 97

2) 28 30

4) 87 89

VIII. Write the short form of each of the following.

(5 x 1 = 5)

1) 4 tens + 9 ones =

4) 5 tens + 3 ones =

2) 1 tens + 7 ones =

5) 6 tens + 3 ones =

3) 9 tens + 6 ones =