

Name :

Class :

Section :

Roll No.

I. Fill in the blanks :

(5 x 1 = 5)

1) is the sign of addition.

2) $3 - 3 =$

3) $6 + 0 =$

4) $3 + 3 =$

5) $7 - 6 =$



II. Count and write the number :

(4 x 1 = 4)

1)  +  + =

2)  +  + =

3)  +  + =

4)  +  + =

III. Do the following additions and subtractions.

(4 x 1 = 4)

1) 22

2) 32

3) 42

4) 66

+ 23

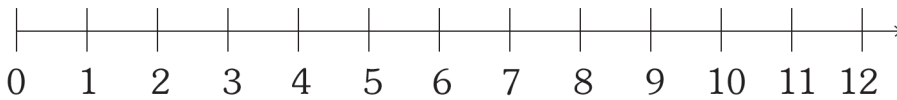
- 17

- 17

+ 23

IV. Do the following subtraction on the number ray :

(2 Marks)



$$10 - 6 = \boxed{}$$

V. Match the following.

(4 x 1 = 4)

- | | |
|------------|--------|
| 1) First | a) V |
| 2) Second | b) I |
| 3) Fifth | c) VII |
| 4) Seventh | d) II |

VI. Do the following additions and subtractions.

(2 x 3 = 6)

- 1) In a garden there are 37 banana trees and 58 guava trees.
What is the total number of trees in the garden ?

- 2) There are 85 apples and 48 mangoes in a basket.
How many more are the apples ?