



UNIT TEST - IV

Class - 3 :: Mathematics



Syllabus :
TB: Term 3 (Units 1 to 4)
Indv.book (Units 11 to 14)

Time : 1 Hour]

[Max. Marks : 25

Name :

Class :

Section :

Roll No.

(3 x 2 = 6)

I. Do the following sums.

- Convert into grams (a) 2 kg 75 g b) 4 kg 150 g
- Convert the following into hours.
a) 4 days b) 2 days 20 hours
- Find the sum of 5 cm 6 mm; 4 cm 9mm; and 10 cm 5 mm

(1 x 4 = 4)

II. Do the following sum.

- The quantities of milk sold by a milk maid on the first three days of a week are respectively 45 l 500 ml, 53 l 250 ml and 64 l 750 ml. Find the total quantity of milk the milkmaid sold on all the three days.

(5 x 1 = 5)

III. Fill in the blanks.

- Which of the two hands of the clock moves faster than the other
- 1000 ml =
- There are days in an ordinary year.
- The unit of measuring mass is
- One metre = centimetres

(3 x 1 = 3)

IV. Write the following times using a.m or p.m.

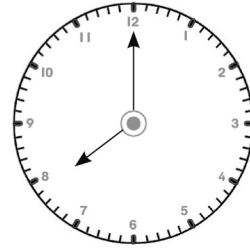
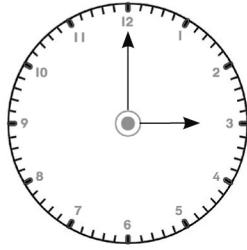
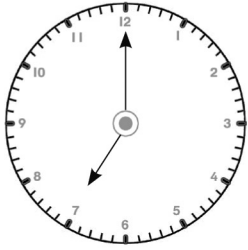
- 9 O' clock in the night _____
- 12 O' clock in the day _____
- 7:15 in the morning _____

Note : Cut along with the marking to avoid uneven cutting or torn.



(3 x 1 = 3)

V. Read each dial given below and Note the time in the box given.



VI. Match the following.

(4 x 1 = 4)

- | | | |
|--------------|------------------|-----|
| 16. March | a) 28 or 29 days | () |
| 17. August | b) 31 days | () |
| 18. November | c) 31 days | () |
| 19. February | d) 30 days | () |
