

# UNIT TEST - I

## UKG - MATHEMATICS

Syllabus : Individual Book Unit -1

25





Max. Marks : 25

Time : 1hr]

Name : ..... Section : ..... Roll No: .....




### I. Name the collections :

$4 \times 2 = 8$

1.  A Collection of .....	2.  A Collection of .....
3.  A Collection of .....	4.  A Collection of .....




### II. Encircle all things of the same kind in each collection given below :

$3 \times 1 = 3$



(1) 
(2) 
(3) 

### III. In each of the following collections one object differs from the rest. Recognize it, cross (×) it :

$3 \times 1 = 3$

- 
- 
- 

V. Some collections of objects are given below. Tick (✓) all objects of the same kind.  $5 \times 1 = 5$



VI. Draw a line to match the same pictures :  $6 \times 1 = 6$

