

# UNIT TEST - II

## UKG - MATHEMATICS

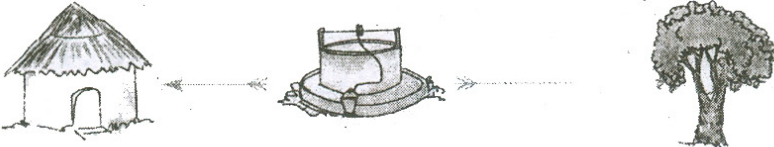



Syllabus : Individual Book Unit 2

25

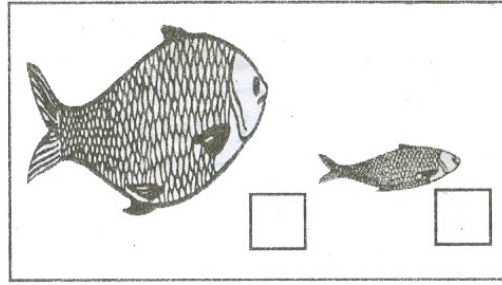

Max. Marks : 25

Name : ..... Section : ..... Roll No: .....

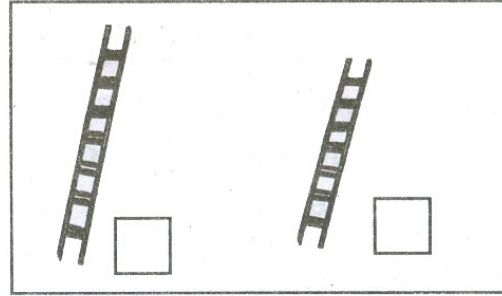

I. Each picture given below is followed by two statements.  
Tick the correct word from the pair given in brackets for  
each statement :  $4 \times 2 = 8$

(1)	
	(a) The hut is [near / far from] the well. (b) The tree is [near / far from] the well.
(2)	
	(a) A monkey is [On / Under] the branch eating a mango. (b) A fox is [On / Under] the grapevine plant.
(3)	
	(a) A boy is [On / Under] the ladder. (b) The girl is [On / Under] the ladder.
(4)	
	(a) The boy is [near / far from] the hut. (b) The boy is [near / far from] the post-office.


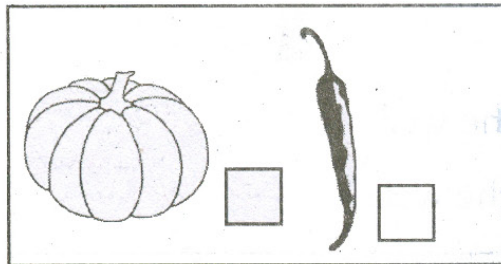
II. Tick (✓) the Big one and cross (×) small one :  $4 \times 1 = 4$



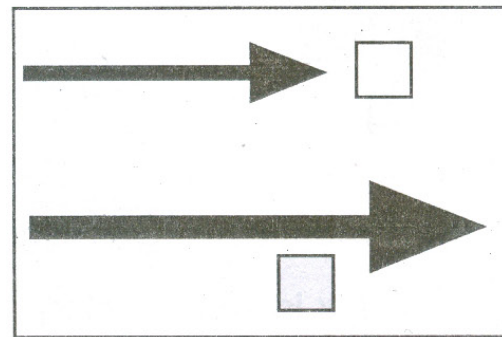
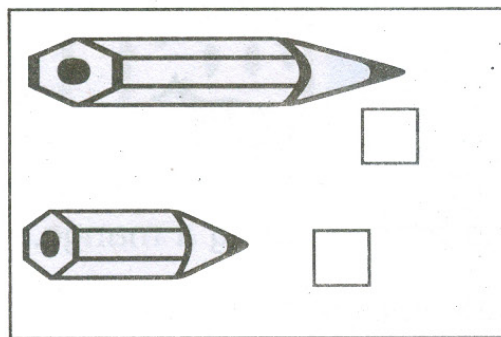
III. Tick (✓) the tall one and cross (×) short one :  $4 \times 1 = 4$



IV. Tick (✓) the Heavy one and cross (×) Light one :  $4 \times 1 = 4$



V. Tick (✓) the Long one and cross (×) Short one :  $4 \times 1 = 4$



VI. Tick (✓) the thickest :

$$1 \times 1 = 1$$

