

UNIT TEST - IV

UKG - SCIENCE

Syllabus : Individual Book Lessons 20 to 28

25

Max. Marks : 25

Name : Section : Roll No:

I. Answer the following questions :

5 × 2 = 10

1. Name the sense organs.

Ans : _____

2. What gives us energy ?

Ans : _____

3. Why do we need a house ?

Ans : _____





4. Name two means of transport you know.

Ans : _____








5. Mention any two good habits.

Ans : _____

II. Write the names of the following pictures : $4 \times 1 = 4$



III. Write the names of the following pictures : $7 \times 1 = 7$



IV. Match the following :

$4 \times 1 = 4$

