


Name : Section : Roll No :



QUARTERLY EXAMINATIONS

Mathematics

MARKS 50

Class : I

Time : 2½ Hours

Syllabus

Chapters : 1 to 4

School Stamp

I. Write the number names for the following numerals. (4 × 1 = 4)

1. 53 =

3. 98 =

2. 46 =

4. 69 =

II. Write the numerals for the following number names. (4 × 1 = 4)

1. Thirty Seven =

3. Forty Eight =

2. Sixty Three =

4. Eighty Six =

III. Write the number which comes before. (4 × ½ = 2)

1.

	37
--	----

2.

	83
--	----

3.

	96
--	----

4.

	40
--	----

IV. Write the number which comes after. (4 × ½ = 2)

1.

29	
----	--

2.

46	
----	--

3.

73	
----	--

4.

91	
----	--

V. Write the number which comes middle. (2 × 1 = 2)






1.

51		53
----	--	----

2.

84		86
----	--	----

VI. Count the objects given in each row and write the numeral of each. (5 × 1 = 5)

VII. Write the missing numerals in the given boxes. (2)

66 68 69 70 72 74 76

VIII. Match the following number names with their numeral. (5 × 1 = 5)

Thirty Eight	45
Twelve	86
Eighty Six	63
Forty Five	38
Sixty Three	12

IX. Write the expanded form of each of the following. (2 × 2 = 4)

e.g. : $48 = 4 \text{ Tens} + 8 \text{ Ones} = 4(10) + 8(1) = 40 + 8$

1. $92 = \text{----- Tens} + \text{----- Ones} = \text{-----} = \text{-----}$

2. $36 = \text{----- Tens} + \text{----- Ones} = \text{-----} = \text{-----}$

X. Write the short form of each of the following. (2 × 2 = 4)

e.g. : $5 \text{ Tens} + 5 \text{ Ones} = 5(10) + 5(1) = 50 + 5 = 55$

1. $7 \text{ Tens} + 5 \text{ Ones} = \text{-----} = \text{-----} = \text{-----}$

2. $4 \text{ Tens} + 2 \text{ Ones} = \text{-----} = \text{-----} = \text{-----}$

XI. Write the following numbers in ascending order. (2)

8, 1, 5, 9, 4

_____, _____, _____, _____, _____

XII. Write the following numbers in descending order. (2)

5, 3, 4, 7, 1

_____, _____, _____, _____, _____

XIII. Fill in the blanks with "<, > or =". (4 × ½ = 2)

1. 27 31 2. 34 43 3. 80 70 4. 36 36

XIV. Tick (✓) the greatest number of the following sets. (2 × 1 = 2)

✓

e.g. : 13 19 15

1. 56 84 95

2. 54 63 72

