


Name : Section : Roll No :

C - 15



VIKRAM
Real Life
TEXT BOOK-2

HALF YEARLY EXAMINATIONS

Mathematics

MARKS **50**

Class : II

Time : 2½ Hours

Syllabus

Chapters: 1 to 8

School Stamp

I. Write the following number in expanded form. (2)

$$928 = \square \text{ Hundreds} + \square \text{ Tens} + \square \text{ Ones}$$
$$=$$
$$=$$

II. Fill in the boxes with "<, > or =". (4 × ½ = 2)

1. 236 228 3. 460 406
2. 839 938 4. 566 566

III. Write the following numbers in ascending order. (2)

356, 649, 132, 538
_____, _____, _____, _____

IV. Write the following numbers in descending order. (2)

812, 799, 809, 790, 800
_____, _____, _____, _____, _____

V. Observe each of the following patterns and write the missing numerals. (2 × 2 = 4)

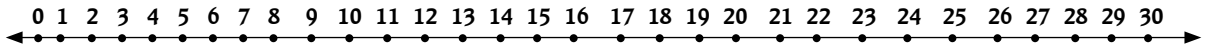
1. 630, 620, 610, _____, _____, _____, _____, _____, 540.
2. 900, 910, 920, _____, _____, _____, _____, _____, 990.

VI. Write multiplication fact for each of the following. (2 × 1 = 2)

1. $6 + 6 + 6 + 6 = 24$
Multiplication fact = $\square \times \square = \square$
2. $10 + 10 + 10 + 10 + 10 = 50$
Multiplication fact = $\square \times \square = \square$

Note : Cut along with the marking to avoid uneven cutting or torn.

VII. Find the following product using number line. (2)



$$3 \times 8 =$$

VIII. Do the following additions. (4 × 1 = 4)

- | | | | |
|--------|--------|--------|--------|
| 1. 185 | 2. 136 | 3. 270 | 4. 414 |
| + 102 | + 221 | + 123 | + 203 |
| + 210 | + 140 | + 205 | + 171 |
| _____ | _____ | _____ | _____ |
| _____ | _____ | _____ | _____ |

IX. Do the following subtractions. (4 × 1 = 4)

- | | | | |
|--------|--------|--------|--------|
| 1. 312 | 2. 364 | 3. 416 | 4. 362 |
| - 161 | - 226 | - 136 | - 157 |
| _____ | _____ | _____ | _____ |
| _____ | _____ | _____ | _____ |

X. Do the following multiplications. (4 × 1 = 4)

- | | | | |
|--------|--------|--------|--------|
| 1. 302 | 2. 322 | 3. 111 | 4. 576 |
| × 3 | × 3 | × 6 | × 1 |
| _____ | _____ | _____ | _____ |
| _____ | _____ | _____ | _____ |


XI. Do the following divisions. (4 × 1 = 4)

- | | | | |
|-----------|-----------|-----------|-----------|
| 1. 45 ÷ 9 | 2. 32 ÷ 8 | 3. 24 ÷ 8 | 4. 56 ÷ 7 |
|-----------|-----------|-----------|-----------|

XII. Write the shaded part in fraction for each of the following. (4 × 1 = 4)




= _____



= _____



= _____



= _____

XIII. Fill in the boxes.**(6 × 1 = 6)**

1. 10 paise coins make one rupee.
2. In the fraction $\frac{7}{20}$ the numerator is and the denominator is
3. A 100 rupee note has the same value as 5 rupee notes.
4. Write the fraction with 2 as numerator and 11 as denominator
5. $35 \div 5 =$
6. The place value of 4 in 475 is

XIV. Answer the following.**(4 × 2 = 8)**

1. The cost of an easy chair is Rs. 375, the cost of a lemon set is Rs. 118 and the cost of a tub is Rs. 125. Find the total cost of all the three.

Sol.

2. In a garden there are 59 mango trees and 46 banana trees. How many more are the mango trees ?

Sol.

3. A cricketer played 3 innings in a series. If he scored an average of 65 runs, how many runs in all did he score ?

Sol.

4. The cost of a ball pen is Rs. 12.50 and the cost of a scale is Rs. 3.25. How much more is the cost of the ball pen than the cost of the scale ?

Sol.

