

# UNIT TEST - III

## Class - 2 : : General Knowledge

Time : 1 Hour]

[Max. Marks : 25

25

Name :

Class :

Section :

Roll No.

(5 x 1 = 5)

### I. Answer the questions about our body. Pick and tick the right one.

- Which sense of organ helps us to see the things around us ?  
a) skin ( )    b) nose ( )    c) eyes ( )    d) ears ( )
- You touched a hot object. Which sense organ helps you feel 'pain' ?  
a) nose ( )    b) leg ( )    c) skin ( )    d) eyes ( )
- Which part of your body does the food you eat go into ?  
a) nose ( )    b) stomach ( )    c) eyes ( )    d) ears ( )
- At which part you can bend ?  
a) joints ( )    b) heart ( )    c) brain ( )    d) kidneys ( )
- About 70% of human body is  
a) oil ( )    b) water ( )    c) milk ( )    d) blood ( )

### II. Choose the correct word from the box and complete the following sentences.

(5 x 1 = 5)

Cool drinks, February & March, December, June, Cloudy day,

- On a ....., the weather is pleasant.
- 21st ..... is the shortest day of the year.
- ..... and ..... are the months of spring season.
- We like ..... on a hot summer day.
- 23rd ..... is the longest day of the year.

Note : Cut along with the marking to avoid uneven cutting or torn.

**III. Name the parts of computer given below.**

(5 x 1 = 5)

(Web cam, Printer, Key board, Speakers, Mouse,)





1. \_\_\_\_\_ 2. \_\_\_\_\_ 3. \_\_\_\_\_



4. \_\_\_\_\_ 5. \_\_\_\_\_

**IV. Name the tool with the help of pictures and statements.**

(5 x 1 = 5)





1. It is used to strike on something. ....
2. It is used to measure temperature of human body. ....
3. A painter uses it. ....
4. A tailor need it. ....
5. It is used to tighten screws. ....

**Take My Help!** Tape, Saw, Screwdrivers, Brush, Thermometer

**V. Write the name under each road sign.**

(5 x 1 = 5)



**Take My Help!**  
 Right turn, Men at work,  
 No left turn, Pedestrian path,  
 Speed breaker

\*\*\*\*\*