

UNIT TEST - IV

Class - 2 :: Mathematics

Time : 1 Hour]

[Max. Marks : 25

25

Name :

Class :

Section :

Roll No.

I. Fill in the blanks.

(8 x 1 = 8)

- The first day of the week is
- 8000 ml = litres.
- The month of March comes after month.
- 1 metre = cm.
- One quarter of a litre = ml.
- 2 m 75 cm = cm.
- 1 day = hours.
- In a leap year, February has days.

II. Do the following additions.

(2 x 2 = 4)

$$\begin{array}{r} 1. \quad 147 \text{ m} \\ + 456 \text{ m} \\ + 19 \text{ m} \\ \hline \end{array}$$

$$\begin{array}{r} 2. \quad 245 \text{ g} \\ + 275 \text{ g} \\ \hline \end{array}$$

III. Do the following subtractions.

(2 x 2 = 4)


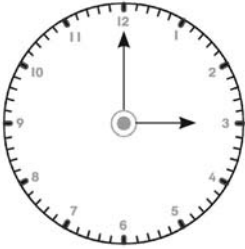

$$\begin{array}{r} 1. \quad \text{kg} - \text{gms} \\ 92 - 450 \\ - 53 - 750 \\ \hline \end{array}$$

$$\begin{array}{r} 2. \quad \text{l} - \text{ml} \\ 7 - 350 \\ - 5 - 150 \\ \hline \end{array}$$

Note : Cut along with the marking to avoid uneven cutting or torn.

IV. Read the time from the dial of each clock shown below.

(3 x 1 = 3)

		
The Minute hand shows	The Minute hand shows	The Minute hand shows
The Hour hand shows	The Hour hand shows	The Hour hand shows
The Time is	The Time is	The Time is

V. Work out the following problems.

(2 x 3 = 6)

- 1) Two tins of groundnut oil contain 9 l 750 ml and 12 l 500 ml of oil in them. What is the quantity of oil in both the tins together ?

Quantity of oil in the first tin = l - ml

Quantity of oil in the second tin =

Total quantity of oil in both the tins =

Hence is the total quantity of oil in both the tins.

- 2) A housewife went to the grocer's shop and purchased 3 kg 500 g of sugar, 1 kg 750 g of dal and 12 kg 750 g of rice. What is the total mass of the three things?

Mass of sugar =

Mass of dal =

Mass of rice =

Total mass = + + =
