


Name : Section : Roll No :

C - 15



VIKRAM
Real Life
TEXT BOOK-3

ANNUAL EXAMINATIONS

Mathematics

MARKS **100**

Class : III

Time : 2½ Hours

Syllabus

Chapters: 1 to 16

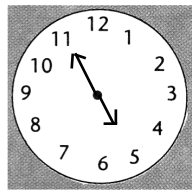
School Stamp

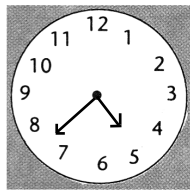
I. Answer any TWELVE of the following questions. (12 × 5 = 60)

1. A milkmaid carries 2 milk cans containing 15 l 500 ml of milk in one and 11 l 750 ml of milk in the other. Find the total quantity of milk in the two cans together.
2. A father and his son are riding on a scooter. Their total mass is 72 kg 400 g. If the mass of the father is 53 kg 750 g, what is the mass of the son ?
3. a) Find the sum of 2314, 3152 and 1213.
b) Subtract 4072 from 4198.
4. Using each digit only once in the same number, write the largest and the smallest numbers which form with the digits 5, 0 and 9.
5. A man divided 726 rupees equally to 6 people. How many rupees does each person get ?
6. Compare $\frac{3}{10}$ and $\frac{3}{8}$.
7. a) Multiply 310 by 8.
b) Divide 500 by 7 and write the quotient and the remainder.
8. Add $\frac{3}{10}$, $\frac{7}{10}$, $\frac{1}{10}$ and $\frac{9}{10}$ using the number line.
9. A painter painted $\frac{7}{15}$ of a wall on one day and $\frac{5}{15}$ of it on the second day. How much more portion did he paint on the first day than on the second ?
10. The sum of two numbers is 1643. If one of the numbers is 567, what is the other number ?
11. Sreenila has 6400 rupees in her bank account. She deposits another 2750 rupees now. What is the total amount she has now in her bank account ?
12. A medicine bottle contains 800 ml of medicine. After using up some medicine 175 ml of medicine is still in the bottle. How much medicine is used up ?

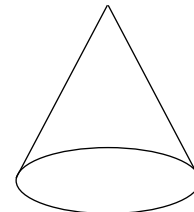
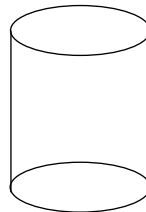

Note : Cut along with the marking to avoid uneven cutting or torn.

13. a) Convert 10 days 15 hours into hours.
 b) Write down the time shown on each clock dial. (in the box given)



























14. Write the names of the following pictures.



15. The following pictograph depicts the number of plants in a garden. Each symbol represents 20 plants.

Rose							
Lily							
Jasmine							
Marigold							

Questions :

- Which plants are the highest in number ? What is their number ?
- Which plants are the least in number ? What is their number ?
- What number do the lily and the rose plants together make ?
- How many more jasmine plants than rose plants are there ?
- Which plants are less in number ? Lily or Marigold ? What is the less number ?

II. Choose the correct answer and write its letter in the bracket . (10 × 1 = 10)

1. $\frac{1}{3}$ of 75 = ()

a) 25

b) 15

c) 19

2. Liquid medicines are measured in ()
 a) gram b) metre c) litre
3. 6105, 6110, 6115, _____ (write the next numeral) ()
 a) 6100 b) 6120 c) 6020
4. Write the numeral for one thousand seventy nine. ()
 a) 1079 b) 1179 c) 1097
5. Multiply 800 by 9 ()
 a) 2700 b) 7200 c) 1800
6. $252 \div 7 =$ ()
 a) 46 b) 36 c) 26
7. $\frac{5}{8}$ means ()
 a) 5 eighths b) 8 fives c) 8 eighths
8. $600 \text{ ml} + 200 \text{ ml} =$ ()
 a) 400 ml b) 800 ml c) 90 ml
9. A rectangle has _____ sides. ()
 a) four b) three c) five
10. The short form of $2000 + 80 + 5 =$ ()
 a) 2850 b) 2085 c) 2058

III. Fill in the blanks.

(10 × 1 = 10)

1. 20 hours = _____ minutes.
2. $329 \times 0 =$ _____
3. A cuboid has _____ faces.
4. The standard unit of measuring mass is _____
5. The place value of 9 in 1976 _____
6. The greatest among 2125, 2215, 2152 is _____
7. Dividend = _____ × quotient + remainder.
8. $24 \times 2 = 2 \times$ _____ = 48
9. Write Hindu – Arabic numeral for XXIX is _____
10. The longer hand on the clock dial shows _____

IV. Answer the following.

(10 × 1 = 10)

1. Write the number names for 64, 96, 189.
 Ans.

2. Write $6000 + 400 + 90 + 7$ in short form.

Ans.

3. A department stores sold 1235 kilograms of rice on one day and 310 kilograms more rice on the second day. How much rice did the stores sell on the second day ?

Ans.

4. Write Roman numeral for 13.

Ans.

5. The sum of two numbers is 7281. The larger of the two numbers is 5072. Find the smaller one.

Ans.

6. In a division sum of the quotient is 73, the divisor is 9 and the remainder is 3. What is the dividend ?

Ans.

7. Represent $\frac{2}{9}$ on the number line.


Ans.

8. Subtract $\frac{7}{40}$ from $\frac{23}{40} - \frac{16}{40}$.

Ans.

9. Write the fraction of the shaded part.

Ans.



10. The cost of a baby doll is Rs. 23.50. How much money do I need to buy 3 such dolls ?

Ans.

V. Match the following.

(5 × 2 = 10)

A

B

1. $1034 + (125 + 148) =$ () a) 654

2. $9700 - 0 =$ () b) 1307

3. $5886 \div 9 =$ () c) 35

4. XXXV = () d) $\frac{1}{6}$

5. $\frac{3}{18} =$ () e) 9700

★★★