

Name :

Class :

Section :


Roll No :

Syllabus : Learning Express Text Book : Unit 10 to 12

I. Each picture has one shape. Name it.

(2 x 1 = 2)

1.



2.



II. Answer the following questions.

(4 x 1 = 4)

1. How many hours does a day have ?

2. Which month has the least number of days ?

3. How many weeks make up a year ?

4. How many days does a leap year have ?

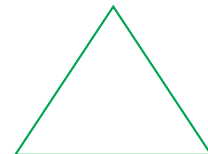

III. Underline the words related to day in blue and those related to night in black.

(4 x ½ = 2)

1. Stars 2. Sun 3. Dreams 4. School

IV. Copy the patterns given below in the same order.

(1 M)



V. Look at the patterns below and fill in the missing boxes.

(4 M)

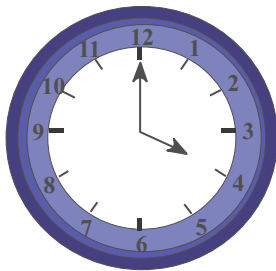
2	4			10
5	10			25
3	6		12	
4	8	12		

VI. Use a long ruler to measure the length of your pencil.

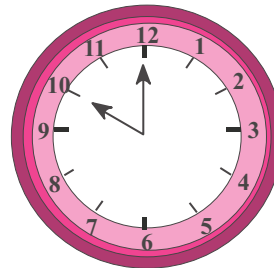
(1 M)

VII. Look at the clocks drawn below. Write the time on the blanks below. (2 x 1 = 2)

1.



2.




VIII. Match the shapes. Draw a line from each shape to its name.

(4 x 1/2 = 2)

1. Square

a.



2. Triangle

b.



3. Circle

c.



4. Rectangle

d.



IX. Answer the following.

(2 x 1 = 2)

- 1. What comes after Monday?**

- 2. How many seconds make up a minute ?**

X. Read these statements carefully and arrange them in the order that you would be doing it during the day.

(5 x 1 = 5)

- 1. Going to school** _____
- 2. Doing home work** _____
- 3. Having lunch** _____
- 4. Returning home after school** _____
- 5. Playing with friends** _____

