


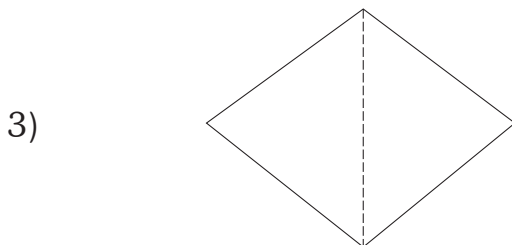
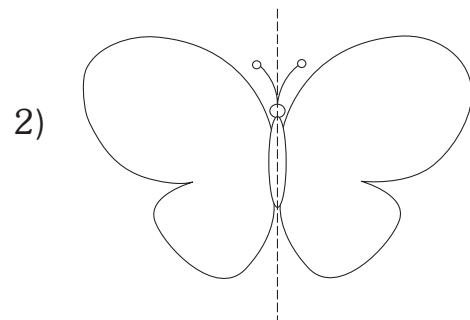



Name : Sec : Roll No:

I. Solve the following problems and decide 'how many' of the object will be shared by each. (5 x 1 = 5)

- 1) There are 9 balloons to be shared by 3 children.
- 2) There are 20 cookies to be distributed among 5 trays.
- 3) There are 15 peaches to be divided between 5 children.
- 4) There are 6 mangoes to be put in a 2 baskets.
- 5) There are 8 biscuits to be shared among 4 people.

II. Colour one-half of each figure. (6 x 1 = 6)



III. Read and find the answer in the word maze

$$(6 \times 1 = 6)$$

Mary has many dolls. She never keeps her dolls alone and hence always groups them in pairs.

How many pairs of dolls would she have if she has given number of dolls ?



10 dolls = _____ pairs of dolls, 12 dolls = _____ pairs of dolls.

8 dolls = _____ pairs of dolls, 4 dolls _____ = pairs of dolls.

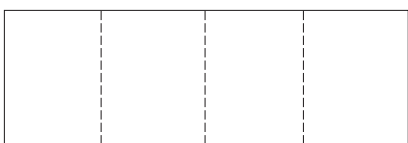
20 dolls = _____ pairs of dolls, 6 dolls = _____ pairs of dolls.

W	E	G	V	S	S	E	V	E	N	P	O
F	S	T	H	U	J	V	B	K	H	I	L
V	E	F	I	V	E	K	P	S	T	P	Y
H	I	N	V	R	C	H	O	G	E	L	M
Q	D	Y	V	H	I	O	P	G	N	N	M
F	C	X	R	D	S	B	H	U	K	O	K
Q	E	D	V	T	I	Y	V	H	D	G	V
Z	S	E	R	F	X	G	F	D	D	I	L
C	W	Q	A	C	K	J	G	U	J	I	M
V	X	R	F	O	U	R	U	I	O	K	V
B	H	F	I	K	C	D	G	H	K	X	U
U	N	T	B	R	V	H	T	H	R	E	E

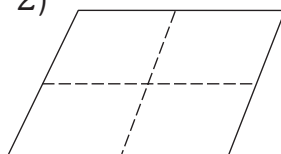
IV. Colour the shapes that show 4 equal parts.

$$(4 \times 2 = 8)$$

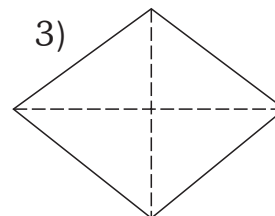
1)



2)



3)



4)

