



SUMMATIVE ASSESSMENT - II

50

Max. Marks : 50

Syllabus:
Units : 1-5

Lotus Rainbow Semester Book

Time : 2½ Hrs.

Class -1 : SEMESTER - II : Mathematics

Name : Sec : Roll No:

I. Answer the following questions.

(6 x 2 = 12)

1) How many hours does a day have ?

.....

2) How many seconds make up a minute ?

.....

3) How many weeks make up a year ?

.....

4) What comes before November ?

.....

5) How many days does a leap year have ?

.....


6) Which month has the least number of days ?

.....

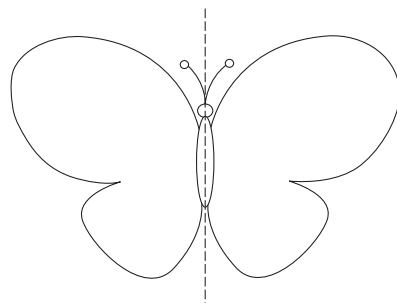
II. Colour one half of each figure.

(6 x 1 = 6)


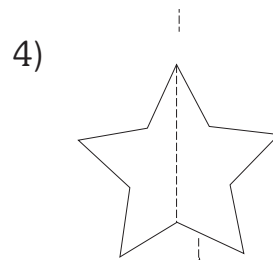
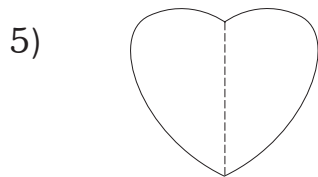
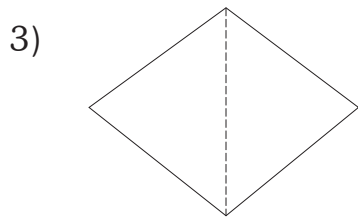
1)



2)



Note : Cut along with the marking to avoid uneven cutting or torn.



III. Name the following.

(4 x 1 = 4)

1) This shape has 3 corners and 3 sides.

2) This shape has 2 short sides and 2 long sides.

3) This shape has 4 equal sides.

4) This shape is a round.

IV. Read these statements carefully and arrange them in the order that you would be doing it during the day.

(6 x 1 = 6)

1) Going to school _____

2) Bathing _____













3) Doing homework _____

4) Having lunch _____

5) Returning home after school _____

6) Playing with friends _____

V. Based on the given pictograph of fruits liked by Rohan, Smita and Tanya, answer the following questions. (5 x 1 = 5)

Rohan	Smita	Tanya
		
		
		
		


- 1) How many apples does Smita have ? _____
- 2) Who has the least number of mangoes ? _____
- 3) Who has the most number of cherries ? _____
- 4) Who has the least number of apples ? _____
- 5) How many bananas does Rohan have ? _____

VI. Solve the following problems and decide 'how many' of the object will be shared by each. (4 x 1 = 4)

- 1) There are 20 cookies to be distributed among 5 trays.
- 2) There are 15 peaches to be divided between 5 children.
- 3) There are 6 mangoes to be put in 2 baskets.
- 4) There are 8 biscuits to be shared among 4 people.

VII. Each picture has one shape. Name it.


(6 x 1 = 6)



1. _____

2. _____

3. _____



4. _____

5. _____

6. _____

VIII. Write the words related to day in blue and those related to night in black.

(7 x 1 = 7)

1) Stars

2) Sun

3) School

4) Dreams

5) Moon

6) Playing

7) Sleeping

