



# FORMATIVE ASSESSMENT - III

Lotus Rainbow Semester Book



Max. Marks : 25

**Syllabus:**  
1,2 Lessons

Time : 1 Hour

## Class -2 : SEMESTER - II MATHEMATICS

Name : ..... Sec : ..... Roll No: .....

### I. Solve the following using number line. (6 x 2 = 12)

1.  $25 \div 5$



2.  $27 \div 9$



3.  $6 \div 2$



4.  $18 \div 3$



5.  $16 \div 4$

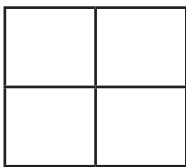


6.  $15 \div 3$




### II. Colour the correct amount of squares as instructed. (7 x 1 = 7)

1.



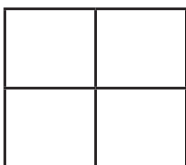
Half

3.




Half

2.



Quarter

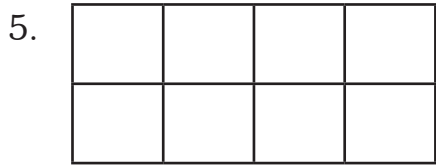
4.



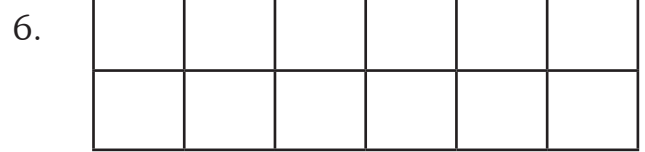
Quarter

Note : Cut along with the marking to avoid uneven cutting or torn.

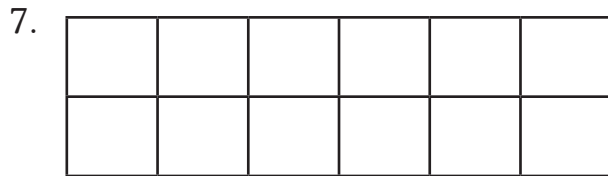




Half



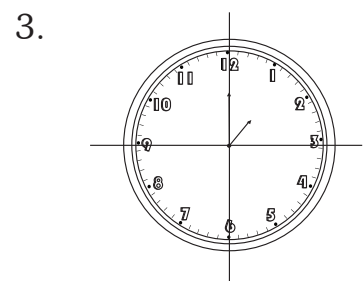
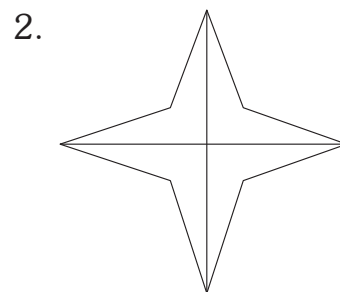
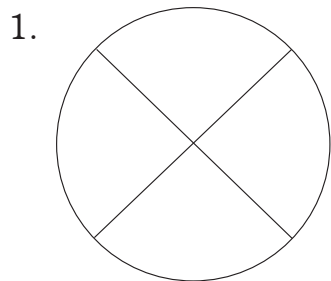
Half



Quarter

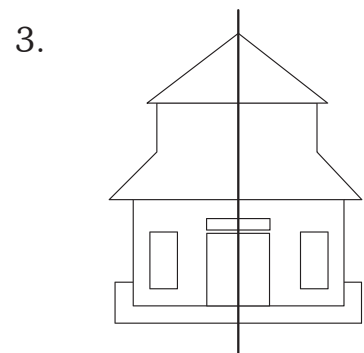

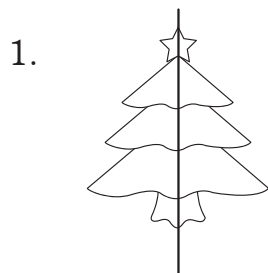
**III. Colour quarter part of each picture.**

**(3 x 1 = 3)**



**IV. Shade half part of each picture.**

**(3 x 1 = 3)**



★★★★