



FORMATIVE ASSESSMENT - IV

Lotus Rainbow Semester Book



Max. Marks : 25

Syllabus:
3-5 Lessons

Time : 1 Hour

Class -2 : SEMESTER - II MATHEMATICS

Name : Sec : Roll No:

I. Answer the following. (4 x 1 = 4)

1. Which day comes before Sunday ?
2. Which day comes before Thursday ?
3. Which day comes after Tuesday ?
4. Which day comes after Saturday ?

II. Convert from litres to millilitres. (3 x 1 = 3)


1. 7l =
2. 3l, 700 ml =
3. 4l, 220 ml =

III. Fill in the blanks. (5 x 1 = 5)

1. 5 m = _____ cm
2. 3 m = _____ cm
3. 900 cm = _____ m
4. 400 cm = _____ m
5. 8 m = _____ cm

IV. Look at the figure and count the number of. (4 x 1 = 4)

1. Squares = _____
2. Rectangles = _____
3. Circles = _____
4. Triangles = _____




Note : Cut along with the marking to avoid uneven cutting or torn.

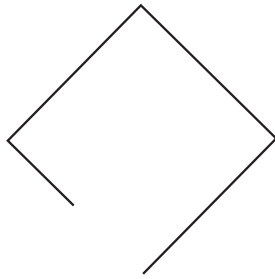


V. Colour all the open figures red and the closed figures yellow. (4 x 1 = 4)

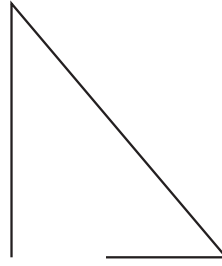
1.




2.



3.

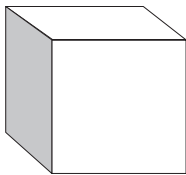


4.



VI. Match and name the shape with its correct description. (5 x 1 = 5)

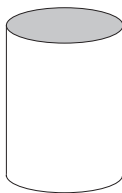
1.



- a. This shape has no flat faces and no straight edges. It has just 1 curved face.

It is a _____


2.



- b. This shape has 1 curved face, and 1 flat face. The flat face is a circle.

It is a _____

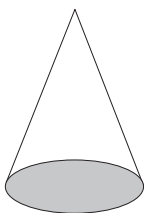
3.



- c. This shape has 6 flat square faces, 12 straight edges and 8 corners.

It is a _____


4.



- d. This shape has 1 curved face and 2 flat circular faces.

It is a _____

5.



- e. This shape has 6 flat faces; 2 are squares and 4 are rectangles. It has 12 straight edges and 8 corners.

It is a _____