

SUMMATIVE ASSESSMENT - II

**Syllabus:
(1, 2 & 3 Chapters)**

Class - 3 :: Semester - II :: General Knowledge






















50

Time : 2½ Hours

Max. Marks: 50









Name :	Section :	Roll No.
---------------	------------------	-----------------

I. Fill in the blanks choosing the right group names. [7x 1 = 7 M]

1. Knives, Forks, Spoons	_____			
2. Screw-driver, Saw, Spanner	_____			
3. Pigeon, Peacock, Sparrow	_____			
4. Pen, Notebook, Pencil	_____			
5. Ginger, Cloves, Cumin	_____			
6. Mango, Apple, Pear	_____			
7. Tables, Chairs, Bed	_____			

Furniture Fruits Spices Stationary Birds Tools Cultery







II. Identify these historical monuments. [8 x 1 = 8 M]

1. 	2. 	3. 	4. 
5. 	6. 	7. 	8. 

Now write your answers here.


- | | |
|----------------------------|----------------------------|
| 1. Konark
_____ | 5. Puri
_____ |
| 2. Kolkatta
_____ | 6. Gujarat
_____ |
| 3. Karnataka
_____ | 7. Fathepur sikri
_____ |
| 4. Madhya Pradesh
_____ | 8. Rajasthan
_____ |

III. Write the nationality and also identify the national flag of the country. [6 x 1 = 6 M]

- | | | | | | |
|----|--------------------------|-----------------------|-------|---|---|
| 1. | <input type="checkbox"/> | The People of America | _____ |  | ① |
| 2. | <input type="checkbox"/> | The People of China | _____ |  | ② |
| 3. | <input type="checkbox"/> | The People of India | _____ |  | ③ |
| 4. | <input type="checkbox"/> | The People of Germany | _____ |  | ④ |
| 5. | <input type="checkbox"/> | The People of Japan | _____ |  | ⑤ |
| 6. | <input type="checkbox"/> | The People of England | _____ |  | ⑥ |

British; Japanese; Indians; Germans; Chinese; Americans

IV. Name these comic characters. [9 x 1 = 9 M]





- | | | |
|-----------------|----------------|------------|
| 1. Rug Rats | 4. Flik | 7. He man |
| 2. Super Man | 5. Donald Duck | 8. Kipper |
| 3. Johnny Bravo | 6. Batman | 9. Phantom |

V. Look at the pictures of the presidents of India.

[5 x 1 = 5 M]

1.



2.



3.



4.



5.



Write your answers here.

1. _____

2. _____

3. _____

4. _____

5. _____

Pratibha Patil

K.R. Narayanan

Zail Singh

Zakir Hussain

Babu Rajendra Prasad

VI. Name the Language spoken in each of the following states.

[6 x 1 = 6 M]

1. Andhra Pradesh _____

2. Asom _____

3. Gujarat _____

4. Punjab _____

5. Tamil Nadu _____

6. West Bengal _____

VII. Name the dance shown. Also name the state where they were born. [9 x 1 = 9 M]











1. Ghoomar

6. Kuchipudi

a. Tamil Nadu

f. Andhra Pradesh

2. Bhangra

7. Kathakali

b. Kerala

g. Kerala

3. Odissi

8. Kathak

c. Odisha

h. Punjab

4. Mohiniattam

9. Bharatnatyam

d. North India

i. Rajasthan

5. Manipuri

e. Manipur

★ ★ ★ ★ ★