

Name :

Section :

Roll No.

A. Write the weights after examining the pictures carefully.

[6 x 1 = 6]

1. 2 packets of salt _____

2. 4 packets of sugar _____

3. 1 packet of tea _____

4. 5 bars of chocolate _____

5. 2 packets of milk _____

6. 1 bottle of honey _____



250 g



500 g



350 g



40 g



750 ml



600 ml

B. Estimate the sum by rounding each number to the nearest ten.

[3 x 1 = 3]

1. $386 + 288 =$ _____

2. $238 + 975 =$ _____

3. $608 + 173 =$ _____

C. Write the following time in numbers.

[3 x 1 = 3]

1. Half past one _____

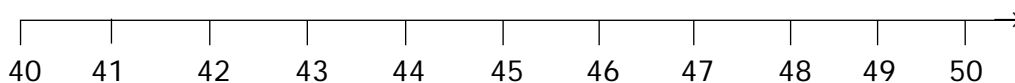
2. Quarter past three _____

3. Half past six _____

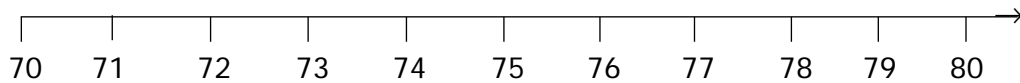
D. Using the number line, round the following numbers to nearest ten.

[3 x 1 = 3]

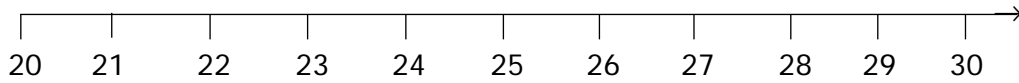
1. Is 41 nearer to 40 or 50 ? _____



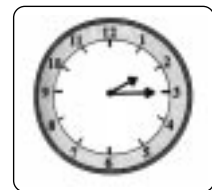

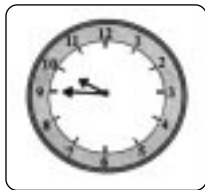
2. Is 73 nearer to 70 or 80 ? _____



3. Is 26 nearer to 20 or 30 ? _____



E. All the clocks below show the time in the afternoon or evening. Write the times below the clocks using 24 - hour time. [4 x 1 = 4]



Time is : _____ Time is : _____ Time is : _____ Time is : _____

F. Add the following.

[3 x 1 = 3]

1. l ml 652 + 3 120 -----	2. l ml 2 345 + 3 276 -----	3. l ml 24 463 + 12 087 -----
---	---	---

G. Solve the following.

[3 x 1 = 3]

1. 3 : 45 : 12 - 2 : 45 : 30 - _____
2. 6 : 34 : 34 - 3 : 24 : 45 - _____
1. 1 : 23 : 34 + 2 : 34 : 45 - _____

★ ★ ★ ★ ★