

Name :

Section :

Roll No.

I. Write the missing numbers to complete 51 to 70.

[10 M]

51				55				59	
	62					67			

II. Circle the bigger number.

[5 x 1 = 5 M]

1.

19	25
----	----

4.

12	19
----	----

2.

35	43
----	----

5.

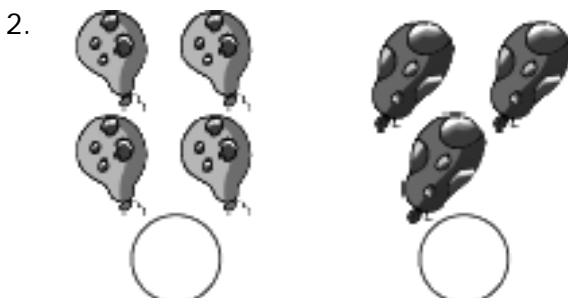
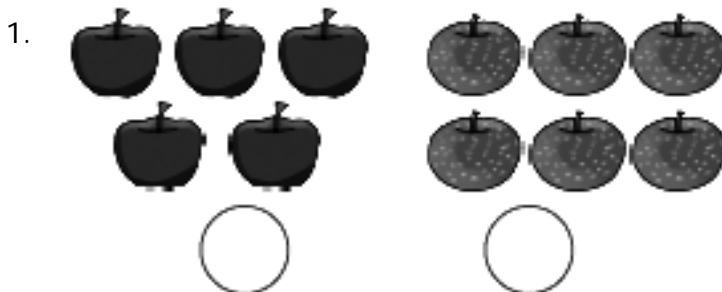
15	14
----	----

3.

7	2
---	---

III. Tick (✓) the collections which have more objects.

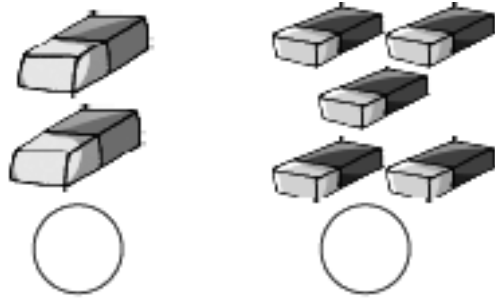
[5 x 1 = 5 M]



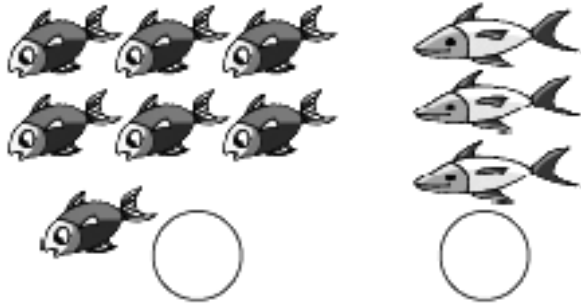
3.



4.



5.



IV. Trace the numbers from 56 to 65.

[5 M]

56	57	58	59	60
61	62	63	64	65

