

Name :

Section :

Roll No.

I. How many are left ? Write the correct number in each box.

[4 x 1 = 4]



4 girls



1 runs away

girls left



5 dogs



1 runs away

dogs left



7 birds




2 fly away

birds left



6 bees







3 fly away

bees left

II. Count and fill in the box.

[2 x 1 = 2]

 <input type="text"/> - <input type="text"/> 0	 = <input type="text"/> 2
 <input type="text"/> 5 - <input type="text"/>	 = <input type="text"/> 5

III. Cross (x) out and subtract.

[5 x 1 = 5]



$$\begin{array}{r} 7 \\ - 3 \\ \hline \hline \end{array}$$



$$\begin{array}{r} 4 \\ - 3 \\ \hline \hline \end{array}$$



$$\begin{array}{r} 5 \\ - 2 \\ \hline \hline \end{array}$$



$$\begin{array}{r} 5 \\ - 1 \\ \hline \hline \end{array}$$



$$\begin{array}{r} 8 \\ - 4 \\ \hline \hline \end{array}$$

IV. Cross (x) the numbers taken away. How many are left ?

[6 x 1 = 6]



$3 - 2 = \square$



$5 - 1 = \square$



$5 - 3 = \square$



$6 - 1 = \square$



$4 - 1 = \square$



$7 - 2 = \square$

V. How many are left ? Write the correct number in each box.

[4 x 1 = 4]



Total balloons Take away = Left



Total cars Take away = Left



Total apples Take away = Left



Total books Take away = Left

VI. Count the beads and write numbers.

[2 x 2 = 4]

★ ★ ★ ★ ★