


Name : ..... Section : ..... Roll No : .....



# ANNUAL EXAMINATIONS

**NUMBERS**

**L.K.G**

Syllabus

Numbers : 1 - 100

MARKS

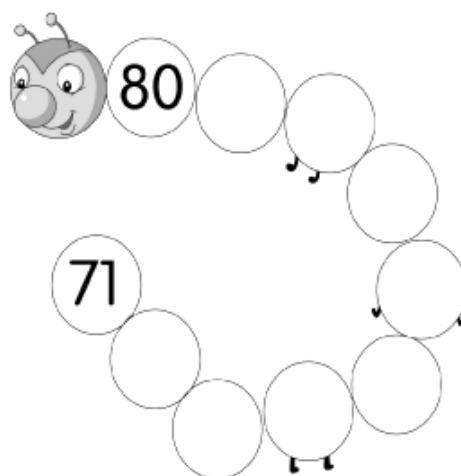
**50**

Time : 2½ Hours

*School Stamp*

I. Complete Mr. Caterpillar's body by filling in the between numbers.

(8M)

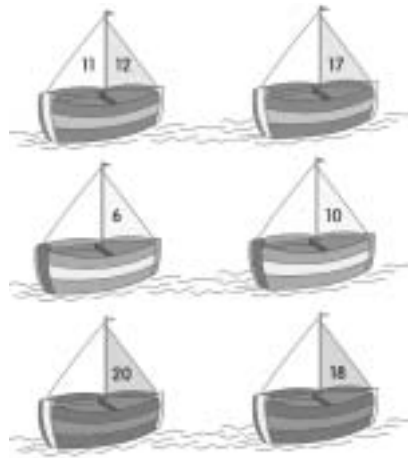


II. Look at the box with numbers on them. Can you write the correct missing numbers in order ?

(15M)

|    |    |    |  |    |    |  |    |    |     |
|----|----|----|--|----|----|--|----|----|-----|
| 1  |    |    |  |    |    |  |    |    | 10  |
|    |    |    |  | 15 |    |  |    | 19 |     |
| 21 |    |    |  |    |    |  | 28 |    |     |
|    |    | 33 |  |    | 36 |  |    |    |     |
|    | 42 |    |  |    |    |  |    |    | 50  |
|    |    | 53 |  | 55 |    |  |    |    |     |
| 61 |    |    |  |    |    |  | 67 |    |     |
|    |    |    |  |    | 76 |  |    | 79 |     |
|    | 82 |    |  |    |    |  | 88 |    |     |
|    |    |    |  | 95 |    |  |    |    | 100 |

III. Look at the number on the sail of each boat. Can you fill in the number that comes before it ? (6M)



IV. Look at these objects on the right. Count and match them to the correct numbers. (5M)

|            |   |  |
|------------|---|--|
| <b>7.</b>  | • |  |
| <b>12.</b> | • |  |
| <b>5.</b>  | • |  |
| <b>15.</b> | • |  |
| <b>2.</b>  | • |  |

V. Each colourful kite flying has a number written on it. Can you match the kite to the string with the number before it ? (4M)



VI. Circle the smaller numbers.

(2M)


1. 

|    |    |
|----|----|
| 67 | 77 |
|----|----|

2. 

|    |    |
|----|----|
| 88 | 98 |
|----|----|

VII. Here are some fish swimming in the water. Number them from 1 – 8 and then colour them. (10M)



☆☆☆