


Name : ..... Section : ..... Roll No : .....



# ANNUAL EXAMINATIONS

**NUMBERS**

MARKS **50**

**Class : Nursery**

**Time : 2½ Hour**

Syllabus

1 to 50

*School Stamp*

**I. Write 36 to 50 numbers.**

**(10)**

--	--	--	--	--	--	--	--	--	--	--	--	--	--	--

**II. Write the number names.**

**(5)**

1. 26 = \_\_\_\_\_

2. 1 = \_\_\_\_\_

3. 33 = \_\_\_\_\_

4. 48 = \_\_\_\_\_

5. 20 = \_\_\_\_\_

**III. Circle the bigger number.**

**(5)**

1. 

20	30
----	----

2. 

5	7
---	---

3. 

42	40
----	----

4. 

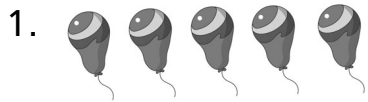
33	30
----	----

5. 

6	8
---	---

IV. Count and circle the correct number.


(5)



2 5 1



6 4 3



8 9 7



1 2 3



4 2 1

V. What comes between.

(5)

1.

2.

3.

4.

5.

VI. What comes before.

(5)

1.

2.

3.

4.

5.

**VII. Count the objects on the left and match them to the numbers on the right. (5)**



1



10



3

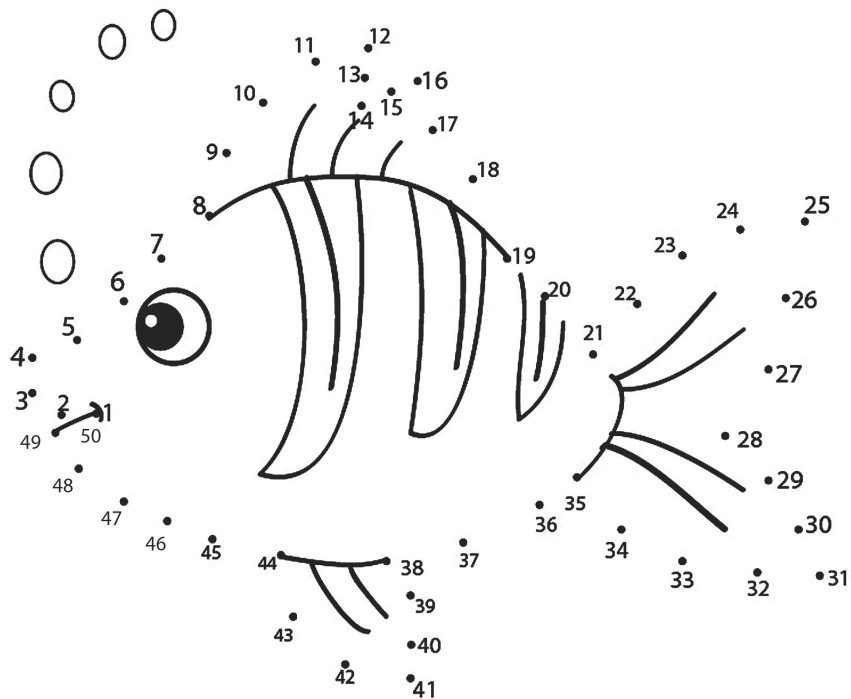


9



2

**VIII. Join the dots 1 - 50 to complete the picture and colour it. (10)**



☆☆☆