

UNIT TEST - I

NUMBERS

Class : Nursery

Syllabus

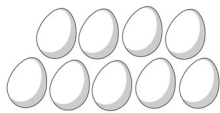
No.s' : 1 - 10

MARKS 25

Time : 1 Hour

School Stamp

I. Count the objects on the left and match them to the numbers on the right. (4)



10



2



9



3

II. Each box has a number on it. Can you guess what number comes next? (5)

1.

9	
---	--

2.

4	
---	--

3.

3	
---	--

4.

1	
---	--

5.

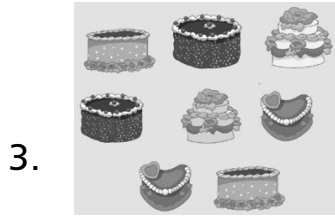

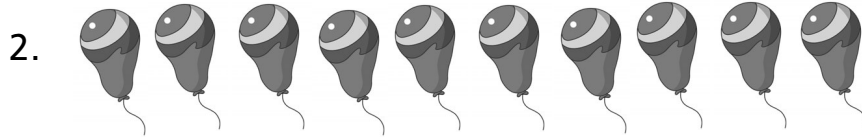
8	
---	--

III. Count and Write. (3)

1.

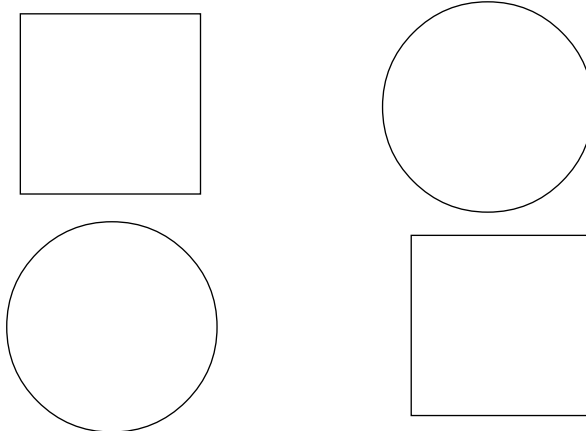


--



IV. Colour 2 circles with a blue crayon.

(5)



V. Write the numbers.

(4)

1. Two = _____

2. Five = _____

3. Seven = _____

4. Nine = _____

VI. Write missing numbers.

(4)

1. 1 _____ 3

2. 8 _____ 10

3. 7 _____ 9

4. 2 _____ 4

