

Name : ..... Section : ..... Roll No : .....



# ANNUAL EXAMINATIONS

## LEARN ABOUT TIME

Class : U.K.G

MARKS  **50**

Time : 2½ Hours

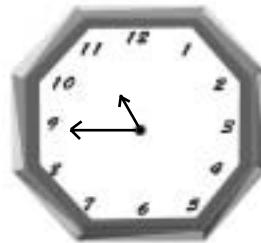
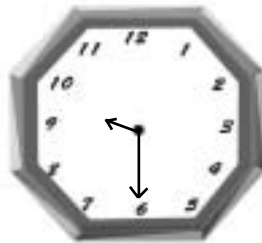
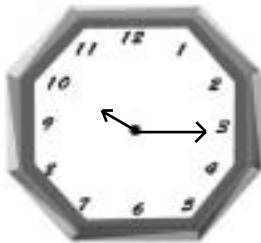
### Syllabus

Day and night (To) All about a Clock  
(Pg.No's : 120 – 130)

*School Stamp*

I. Look at the clocks and write the correct time under each clock.

(4 × 1 = 4)



II. Fill in the blanks.

(5 × 1 = 5)

1. 1 Day = \_\_\_\_\_ hours.


2. 1 Hour = \_\_\_\_\_ minutes.

3. Waking up in the morning \_\_\_\_\_ O' clock.

4. Brushing teeth \_\_\_\_\_ O' clock.

5. Eating breakfast \_\_\_\_\_ O' clock.

III. This is a cuckoo clock. Can you show the time 10 o' clock by drawing the long and short hands correctly? (4 M)



IV. Can you draw the correct times in each clock? (4 × 1 = 4)



7 o' clock



12 o' clock



3 o' clock



10 o' clock

V. Write the missing letters. (10 × 1 = 10)

1. C \_ \_ oc \_ \_

2. ti \_ \_ e

3. l \_ \_ n \_ \_

4. s \_ \_ n

5. Co \_ \_ e

6. n \_ \_ gh \_ \_

7. d \_ \_ y

8. \_ \_ irc \_ \_ e

9. P \_ \_ op \_ \_ e

10. nu \_ \_ b \_ \_ r

**VI. Write the mis-spelt words.**

**(10 × 1 = 10)**

1. Paly \_\_\_\_\_

2. eRad \_\_\_\_\_

3. Snu \_\_\_\_\_

4. Shcloo \_\_\_\_\_

5. rFeind \_\_\_\_\_

6. mNuber \_\_\_\_\_

7. Clcok \_\_\_\_\_

8. iTme \_\_\_\_\_

9. Dya \_\_\_\_\_

10. OHur \_\_\_\_\_

**VII. Answer the following questions.**

**(5 × 2 = 10)**

**1. Write about the different periods in a day ?**

**2. What we do in the afternoon ?**

**3. At what time the moon and stars come out ?**

**4. When do we eat breakfast ?**

**5. When was the a) Sun rises b) Sun sets**

VIII. Identify the pictures and name them.

(3 × 1 = 3)

1.



---

2.



---

3.



---

★★★★★