



ANNUAL EXAMINATIONS

MATHEMATICS

MARKS **50**

Class : U.K.G

Time : 2½ Hours

Syllabus

Comparison of objects (to) Measurement
(Pg.No's : 132 – 160)

School Stamp

I. Write B in the box below the Bigger object and S in the box below the smaller object. (2 × 1 = 2M)

1.



2.



II. Write T in the box below the tall object and s in the box below the short object. (2 × 1 = 2M)

1.



2.



III. Count the number of objects in each set. Tick (✓) the more objects and cross (×) the less objects.

(2 × 1 = 2M)



IV. What comes before numbers ?

(1M)

1. ←

2. ←

3. ←

4. ←

5. ←

2. What comes after numbers ?

(1M)

1. 13 →

2. 19 →

3. 15 →

4. 14 →

5. 12 →

3. Write the missing numbers.

(2M)

1.









6										15
---	--	--	--	--	--	--	--	--	--	----

2.

41											50
----	--	--	--	--	--	--	--	--	--	--	----

V. Look at the pictures carefully and answer the following. (8M)



- | | | | | | |
|---------------------|---|----------------------|-----------------------|---|----------------------|
| Number of Umbrellas |  | <input type="text"/> | Number of Oranges |  | <input type="text"/> |
| Number of Cars |  | <input type="text"/> | Number of Pencils |  | <input type="text"/> |
| Number of Tomatoes |  | <input type="text"/> | Number of Butterflies |  | <input type="text"/> |
| Number of Shoes |  | <input type="text"/> | Number of Candies |  | <input type="text"/> |

VI. Count the number of objects in each set and Tick (✓) the set having greater number of objects. (2M)

1.







2.







VII. Count the number of objects in each set and Tick (✓) the set having less number of objects. (2M)

1.  2. 

VIII. Count the number of objects and put the correct symbols (<, >, =) in the given boxes. (3 × 1 = 3)

1.  2. 

3.  

IX. Do the following additions. (2M)

1. $70 + 15 = \boxed{}$ 2. $21 + 43 = \boxed{}$

X. Do the following subtractions and write answers in the boxes. (2M)

1. $4 - 1 = \boxed{}$ 2. $9 - 5 = \boxed{}$
 3. $5 - 5 = \boxed{}$ 4. $6 - 2 = \boxed{}$

XI. Subtraction by crossing out lines.

(4 × 1 = 4)

1. 7 |||||

- 3

2. 6 |||||

- 5

3. 4 ||||


- 2

4. 3 |||

- 3


XII. Name the following pictures.

(6 × 1 = 6)













XIII. Draw the small hand to show the time on each clock. (4 × 1 = 4)



7 O' clock



12 O' clock



11 O' clock



4 O' clock

XIV. Identify these coins. write their names.

(3 × 1 = 3)



.....



.....



.....

XV. Count and match the coins.

(4M)

3 rupees



10 rupees



6 rupees



8 rupees



★ ★ ★ ★ ★