

Name : Section : Roll No :



UNIT TEST - III

LEARN ABOUT TIME

MARKS **25**

Class : U.K.G

Time : 1 Hour

Syllabus

All About A clock, The Long Hand of a Clock
(Pg. No's : 125)

School Stamp

I. Answer the following questions.

(4 × 2 = 8 M)

1. How many numbers are there in a clock ?

Ans.

2. How many hands are there in a clock ?

Ans.

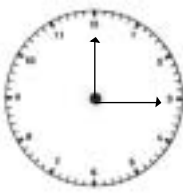
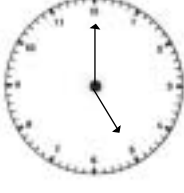
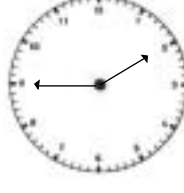

3. What did short hand tells us ?

Ans.

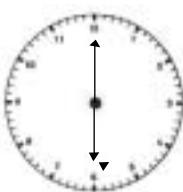



4. What did long hand tells us ?

Ans.

II. Identify the long hand numbers and write them. (4 × 2 = 8)

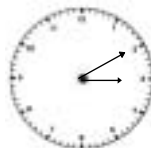
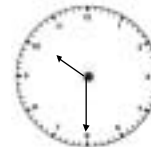



1.		2.		3.		4.	
	_____		_____		_____		_____

III. Identify the short hand numbers and write them. (4 × 1 = 4)

1.		2.		3.		4.	
	_____		_____		_____		_____

IV. Matching.

(5 M)

1.	
2.	
3.	
4.	
5.	

long hand of 8

long hand of 12

long hand of 1

short hand of 3

Short hand of 10

★★★★★