

Name : ..... Section : ..... Roll No : .....



# Half-Yearly Examinations

**NUMBERS**

**Class : L.K.G**

Syllabus

Numbers : 1 - 75

MARKS  **50**

Time : 2½ Hours


*School Stamp*

I. Count the number of dots in each group and write it in the box on the right. (5M)

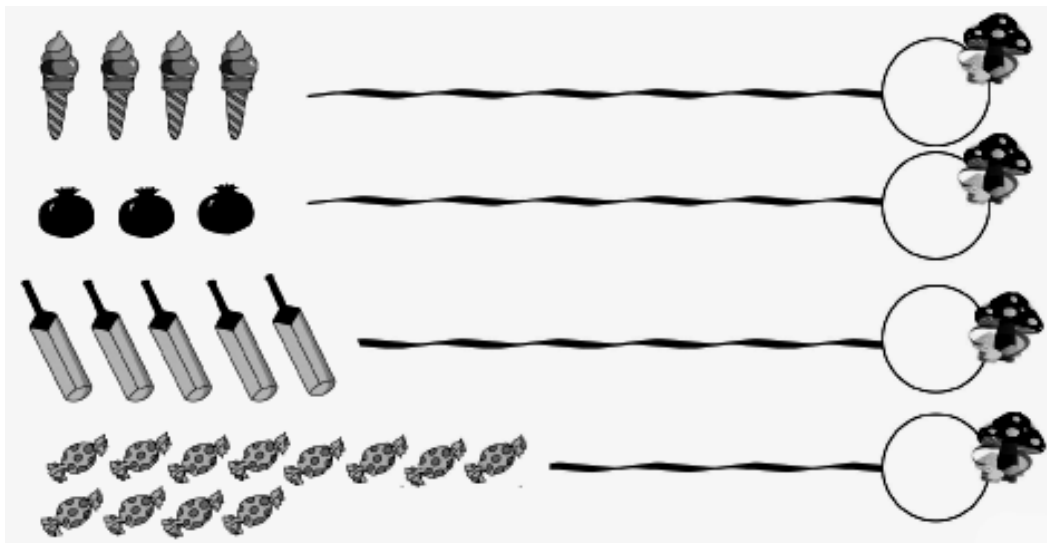


**II. Look at the colour bar and colour the numbers below accordingly. (10M)**

25 – Red    32 – Green    7 – Blue    39 – Yellow    16 – Brown



**III. Count the objects below and write the correct number in the circles. (4M)**



IV. Each lock on the left has a number. It can be unlocked only by a key that has the number that comes after it. Can you find the right pairs? (4M)



V. Look at the number in each box. Can you fill in the number that comes before each one? (5M)

1. 

	58
--	----

2. 

	46
--	----

3. 

	21
--	----

4. 

	75
--	----

5. 

	8
--	---

VI. Look at the number in each box. Can you fill in the number that comes next each one? (5M)

1. 

19	
----	--

2. 

49	
----	--

3. 

74	
----	--

4. 

12	
----	--

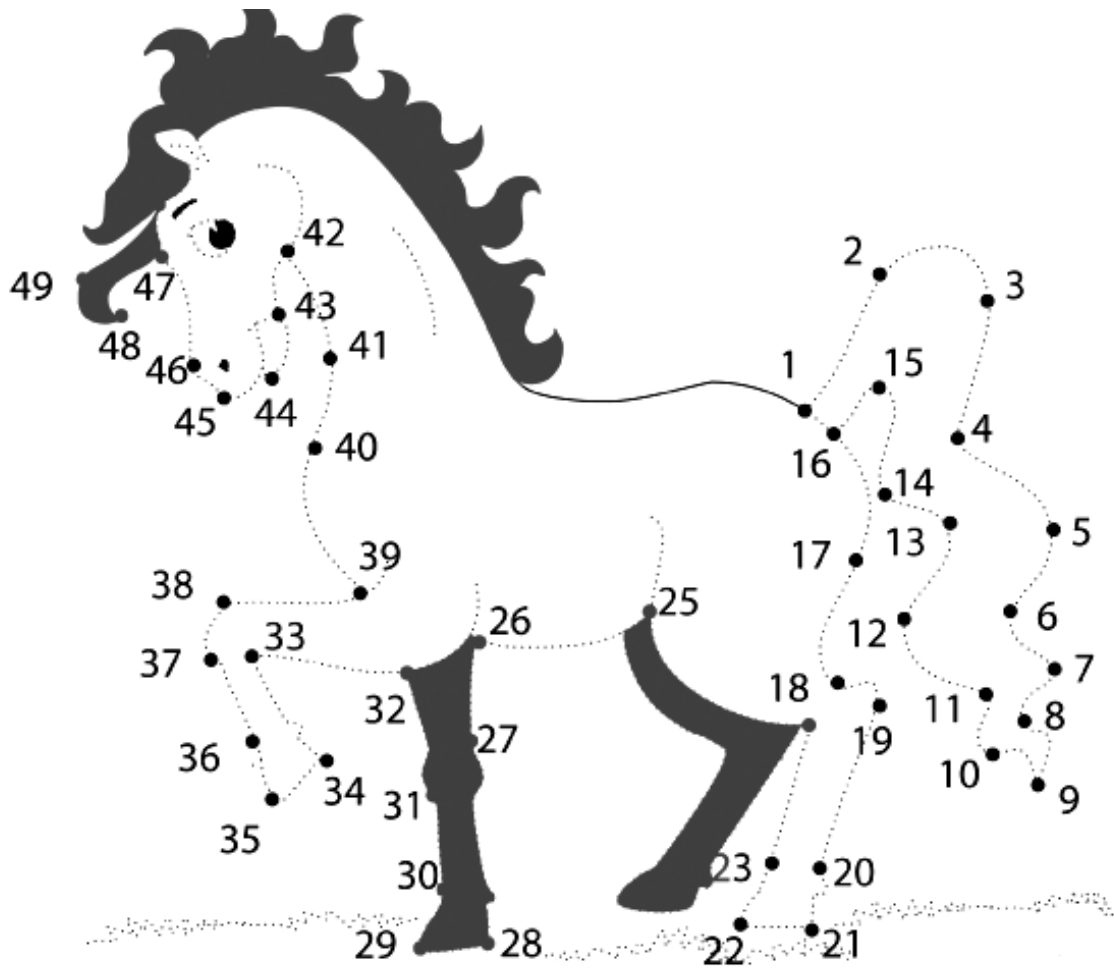
5. 

50	
----	--

VII. Look at the apples with numbers on them. Can you write the correct missing numbers in order? (7M)



VIII. Join the dots from 1 – 50 and complete this picture of a prancing pony. (10M)



☆☆☆