

Name : Section : Roll No :



UNIT TEST - II

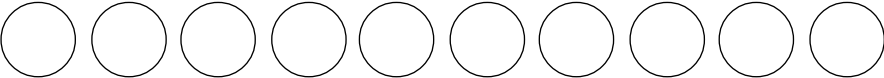
NUMBERS
Class : L.K.G
Syllabus
Numbers : 21 - 40

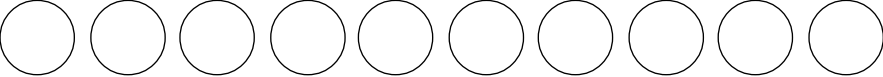
MARKS **25**

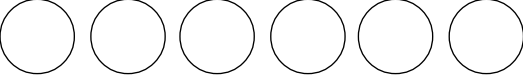
Time : 1 Hour

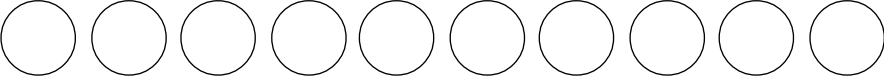
School Stamp

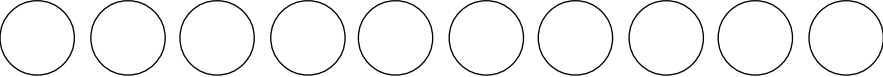
I. Count the number of dots in each group and write it in the box on the right. (3M)

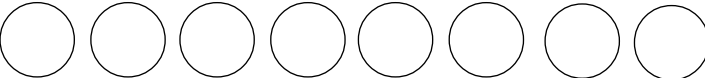
1. 

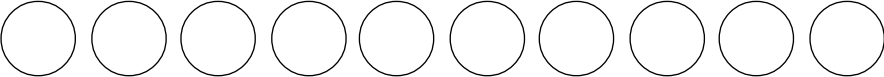




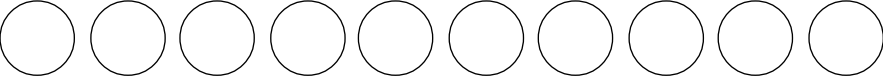
2. 





3. 





II. Look at the number in each box. Can you fill in the number that comes before each one ? (5M)

1.

	35
--	----

2.

	26
--	----

3.

	39
--	----


4.

	29
--	----

5.

	33
--	----

III. Look at the apples with numbers on them. Can you write the correct missing numbers in order ? (8M)



IV. Write the Before and After numbers. (5M)

1. 35 _____

2. 21 _____

3. _____ 29

4. 25 _____

5. _____ 40

V. Circle the smaller numbers. (4M)

1.

21	40
----	----

2.

37	36
----	----

3.

39	38
----	----

4.

33	28
----	----

☆☆☆