


Name : Section : Roll No :



ANNUAL EXAMINATIONS

NUMBERS

MARKS **50**

Class : Nursery

Time : 2½ Hour

Syllabus

1 to 50

School Stamp

I. Write 36 to 50 numbers.

(10)

--	--	--	--	--	--	--	--	--	--	--	--	--	--	--

II. Write the number names.

(5)

1. 26 = _____

2. 1 = _____

3. 33 = _____

4. 48 = _____

5. 20 = _____

III. Circle the bigger number.

(5)

1.

20	30
----	----

2.

5	7
---	---

3.

42	40
----	----

4.

33	30
----	----

5.

6	8
---	---

IV. Count and circle the correct number.


(5)



2 5 1



6 4 3



8 9 7



1 2 3



4 2 1

V. What comes between.

(5)

1.

2.

3.

4.

5.

VI. What comes before.

(5)

1.

2.

3.

4.

5.

VII. Count the objects on the left and match them to the numbers on the right. (5)



1



10



3

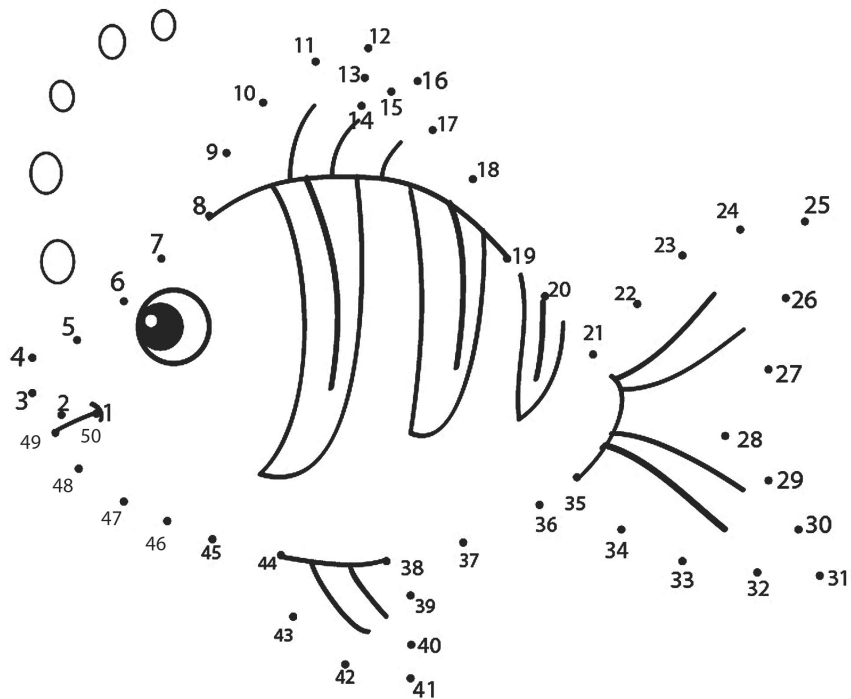


9



2

VIII. Join the dots 1 - 50 to complete the picture and colour it. (10)



☆☆☆