

# UNIT TEST - I

## NUMBERS

Class : Nursery

### Syllabus

No.s' : 1 - 10

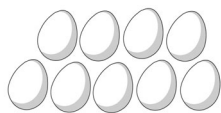
MARKS

25

Time : 1 Hour

School Stamp

I. Count the objects on the left and match them to the numbers on the right. (4)



10



2



9



3

II. Each box has a number on it. Can you guess what number comes next? (5)

1. 

9	
---	--

2. 

4	
---	--

3. 

3	
---	--

4. 

1	
---	--

5. 


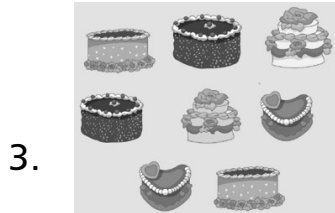

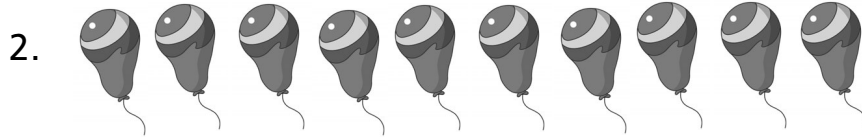
8	
---	--

III. Count and Write. (3)

1.

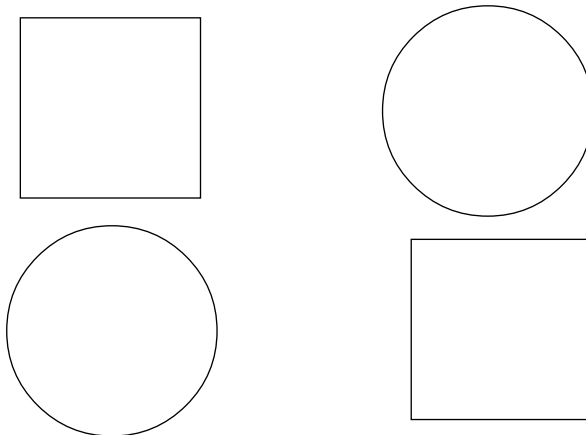


--



**IV. Colour 2 circles with a blue crayon.**

**(5)**



**V. Write the numbers.**

**(4)**

1. Two = \_\_\_\_\_

2. Five = \_\_\_\_\_

3. Seven = \_\_\_\_\_

4. Nine = \_\_\_\_\_

**VI. Write missing numbers.**

**(4)**

1. 1 \_\_\_\_\_ 3

2. 8 \_\_\_\_\_ 10

3. 7 \_\_\_\_\_ 9

4. 2 \_\_\_\_\_ 4

