



FORMATIVE ASSESSMENT-IV

CLASS - 1

Star Mathematics

25

Class - 1 : Mathematics
Syllabus :
Units -

Time : 1 Hour]

[Max. Marks : 25

Name :

Class :


Section :

Roll No.


I. Put a circle on the heaviest object.

[4x1=4]


1.



2.



3.



4.





II. Which is heavier :

[2x1=2]


1. Tiffin or pencil box ?

2. Cat or dog ?



III. There are 7 days in a week. Their names are given below in jumbled up order. Rewrite them in correct order.

[6x1=6]


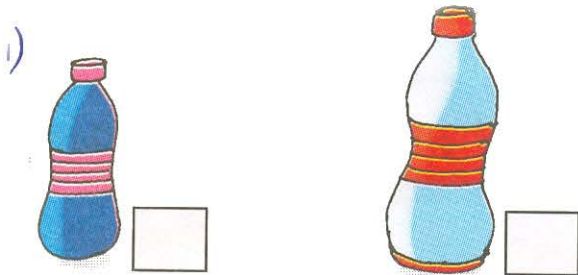


Sunday

IV. Capacity:


[3x1=3]

1. Put a tick (✓) on the container that holds more.



2. Tick (✓) the containers that can hold less than the bucket.

ii)



3. Look at the coins and notes below. Write their value below them.

[5 x 1 = 5]



50-paise coin



1-rupee coin



-rupees coin



-rupees coin



-rupees coin



-rupees note



-rupees note

V. Telling the Time:
What time is it?

[5x1=5]



2 O'clock

