

Name : Section : Roll No :



ANNUAL EXAMINATIONS

LEARN ABOUT TIME

Class : U.K.G

MARKS **50**

Time : 2½ Hours

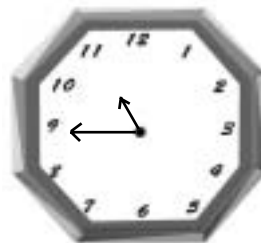
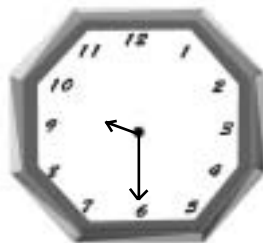
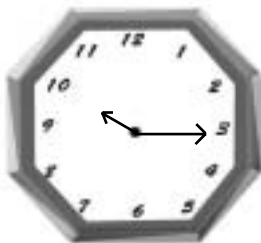
Syllabus

Day and night (To) All about a Clock
(Pg.No's : 120 – 130)

School Stamp

I. Look at the clocks and write the correct time under each clock.

(4 × 1 = 4)



II. Fill in the blanks.

(5 × 1 = 5)

1. 1 Day = _____ hours.


2. 1 Hour = _____ minutes.

3. Waking up in the morning _____ O' clock.

4. Brushing teeth _____ O' clock.

5. Eating breakfast _____ O' clock.


III. This is a cuckoo clock. Can you show the time 10 o' clock by drawing the long and short hands correctly? (4 M)



IV. Can you draw the correct times in each clock? (4 × 1 = 4)



7 o' clock



12 o' clock



3 o' clock



10 o' clock

V. Write the missing letters. (10 × 1 = 10)

1. C _ _ oc _ _

2. ti _ _ e

3. l _ _ n _ _

4. s _ _ n

5. Co _ _ e

6. n _ _ gh _ _

7. d _ _ y

8. _ _ irc _ _ e

9. P _ _ op _ _ e

10. nu _ _ b _ _ r

VI. Write the mis-spelt words.

(10 × 1 = 10)

1. Paly _____

2. eRad _____

3. Snu _____

4. Shcloo _____

5. rFeind _____

6. mNuber _____

7. Clcok _____

8. iTme _____

9. Dya _____

10. OHur _____

VII. Answer the following questions.

(5 × 2 = 10)

1. Write about the different periods in a day ?

2. What we do in the afternoon ?

3. At what time the moon and stars come out ?

4. When do we eat breakfast ?

5. When was the a) Sun rises b) Sun sets

VIII. Identify the pictures and name them.

(3 × 1 = 3)

1.



2.



3.



★★★★★