

C - 14



U.K.G

QUARTERLY EXAMINATIONS

MATHEMATICS

MARKS **50**

Class : U.K.G




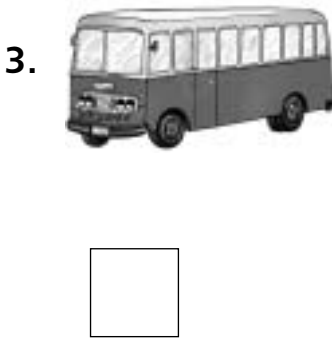



Time : 2½ Hours

Syllabus

Comparison of objects Big and Small (To) odd one
(Pg.No's : 132 – 139)

School Stamp

I. Write 'B' in the box below the 'Bigger' object and 'S' in the box below the 'Smaller' object.
(5 × 2 = 10)




II. Write the numeral and the number name.


(5 M)

Numeral	Number	Numeral	Number	Numeral	Number
1	One				
2	Two				
3	Three				
4	Four				
5	Five				


III. Count the articles in each group given below and circle the correct number. (10 M)



- 6
- 7
- 8
- 9



- 8
- 9
- 6
- 5



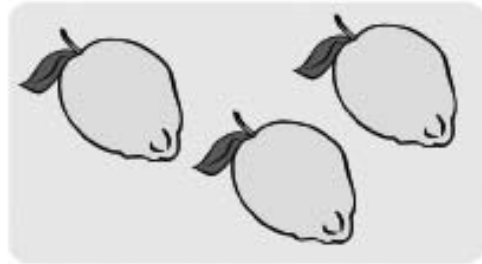
- 3
- 4
- 5
- 6



- 5
- 7
- 9
- 6



- 5
- 6
- 7
- 8



- 1
- 2
- 3
- 4



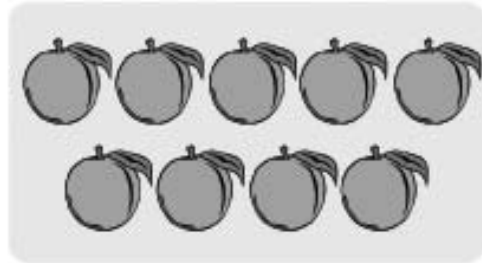
- 3
- 2
- 4
- 1



- 3
- 7
- 5
- 6

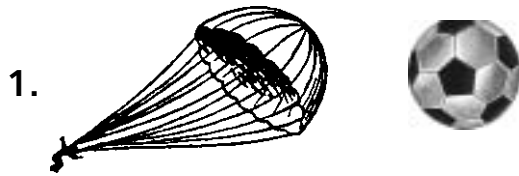


- 1
- 3
- 2
- 4




- 9
- 8
- 7
- 6

IV. Write 'H' in the box below the 'Heavy' object and 'L' in the box below the 'Light' object. (5 × 2 = 10)




V. Count the items in each set given below and write its number and number name. (5 × 2 = 10)

1. 


2. 

3. 

4. 

5. 

VI. Look at the below objects & circle the odd one. (5 × 1 = 5)

1. 

2. 

3. 

4. 

5. 