

Name : ..... Section : ..... Roll No : .....



# UNIT TEST - IV

## LEARN ABOUT TIME

MARKS  **25**

Class : U.K.G

Time : 1 Hour

Syllabus

Reading Time  
(Pg No : 127)

*School Stamp*


I.1. How do we know an hour is completed ?

(2 M)

Ans.

2. Identify the long hand and short hand numbers on the clock and say what the time is ?

(5 M)

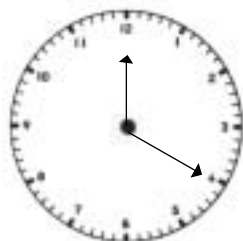


Ans.


II. Identify the hands for below clocks.

(4 × 1 = 4)

1.



2.




Short hand \_\_\_\_\_

Short hand \_\_\_\_\_

Long hand \_\_\_\_\_

Long hand \_\_\_\_\_

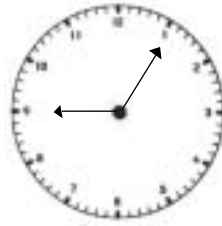
3.



Short hand \_\_\_\_\_

Long hand \_\_\_\_\_

4.



Short hand \_\_\_\_\_

Long hand \_\_\_\_\_


III. Fill in the blanks.

(2 × 1 = 2)

1. 1 Day = \_\_\_\_\_ hours.

2. 1 Hour = \_\_\_\_\_ minutes.

III. This is a cuckoo clock. Can you show the time 10 O' clock by drawing the long and short hands correctly? (4 M)



IV. Can you draw the correct times in each clock ?

(4 × 2 = 8)



7 O' clock



12 O' clock



3 O' clock



10 O' clock

★★★★★