

Name : ..... Section : ..... Roll No : .....



# UNIT TEST - IV

**MATHEMATICS**

MARKS 25

**Class : U.K.G**

**Time : 1 Hour**

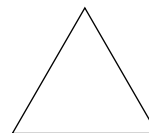

Syllabus

Shapes and Patterns to Measurement  
(Pg No's : 155 – 158)

*School Stamp*

**I. Identify the shapes and name them.**

**(4 M)**



\_\_\_\_\_

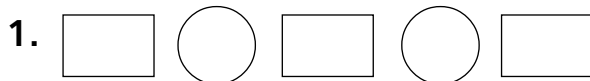
\_\_\_\_\_

\_\_\_\_\_

\_\_\_\_\_

**II. Complete the patterns.**

**(5 × 2 = 10)**



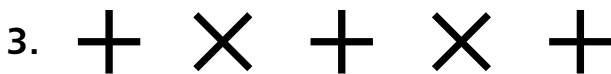
\_\_\_\_\_

\_\_\_\_\_



\_\_\_\_\_

\_\_\_\_\_



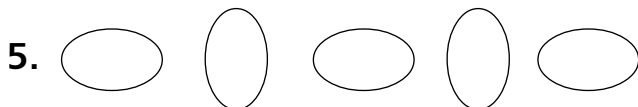
\_\_\_\_\_

\_\_\_\_\_



\_\_\_\_\_



\_\_\_\_\_



\_\_\_\_\_

\_\_\_\_\_

III. Look at the pictures and match them to the shapes. (4 M)



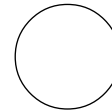
IV. How geometrical Mr. Golu is !

(4 M)

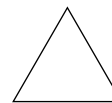
Write



How many ?



How many ?



How many ?

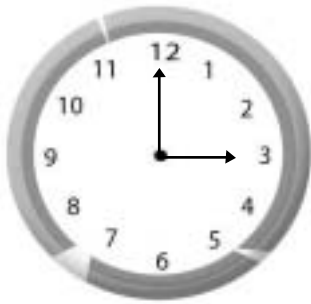


How many ?



V. Read the time and write it below the clock.

(3 × 1 = 3M)



★★★★★